



collegebatch.com

click to campus

TG EdCET 2024 URDU Question Paper with Preliminary Key - Shift 1

Telangana State Council Higher Education (TS EdCET)

Download TS EdCET /TG EdCET Previous Year Question Papers & Syllabus - [Click Here](#)

Telangana State Council Higher Education

Notations :

- 1.Options shown in green color and with ✓ icon are correct.
- 2.Options shown in red color and with ✗ icon are incorrect.

| | |
|--|---------------------------------------|
| Question Paper Name : | EDCET URDU 2024 23rd May 2024 Shift 1 |
| Subject Name : | EDCET URDU 2024 |
| Creation Date : | 2024-05-23 15:33:39 |
| Duration : | 120 |
| Total Marks : | 150 |
| Display Marks: | No |
| Share Answer Key With Delivery Engine : | Yes |
| Actual Answer Key : | Yes |
| Calculator : | None |
| Magnifying Glass Required? : | No |
| Ruler Required? : | No |
| Eraser Required? : | No |
| Scratch Pad Required? : | No |
| Rough Sketch/Notepad Required? : | No |
| Protractor Required? : | No |
| Show Watermark on Console? : | Yes |
| Highlighter : | No |
| Auto Save on Console? | Yes |
| Change Font Color : | No |
| Change Background Color : | No |
| Change Theme : | No |
| Help Button : | No |

Show Reports : No
Show Progress Bar : No

TS EdCET

Group Number : 1
Group Id : 3819065
Group Maximum Duration : 0
Group Minimum Duration : 120
Show Attended Group? : No
Edit Attended Group? : No
Break time : 0
Group Marks : 150
Is this Group for Examiner? : No
Examiner permission : Cant View
Show Progress Bar? : No

Subject

Section Id : 38190621
Section Number : 1
Section type : Online
Mandatory or Optional : Mandatory
Number of Questions : 60
Number of Questions to be attempted : 60
Section Marks : 60
Enable Mark as Answered Mark for Review and Clear Response : Yes
Maximum Instruction Time : 0
Sub-Section Number : 1

Sub-Section Id : 38190625

Question Shuffling Allowed : Yes

Is Section Default? : null

Question Number : 1 Question Id : 381906605 Question Type : MCQ Option Shuffling : No
Display Question Number : Yes Is Question Mandatory : No Calculator : None Response Time
: N.A Think Time : N.A Minimum Instruction Time : 0

Correct Marks : 1 Wrong Marks : 0

Among the following, a number that is **NOT** an irrational number

ذیل میں کونسا عدد غیر ناطق عدد نہیں ہے۔

Options :

1. ✘ $\sqrt{2}$

2. ✘ π

3. ✘ 1.12112111211112 ...

4. ✔ $1.\overline{36}$

Question Number : 2 Question Id : 381906606 Question Type : MCQ Option Shuffling : No
Display Question Number : Yes Is Question Mandatory : No Calculator : None Response Time
: N.A Think Time : N.A Minimum Instruction Time : 0

Correct Marks : 1 Wrong Marks : 0

The value of $2 \log 10 - \log 4 - \log 25$ is

کی قدر ہوگی۔ $2 \log 10 - \log 4 - \log 25$

Options :

1. ✔ 0

2. ✖ 1

3. ✖ 10

4. ✖ 100

Question Number : 3 Question Id : 381906607 Question Type : MCQ Option Shuffling : No
Display Question Number : Yes Is Question Mandatory : No Calculator : None Response Time
: N.A Think Time : N.A Minimum Instruction Time : 0

Correct Marks : 1 Wrong Marks : 0

If the polynomial $p(x) = x^3 - x^2 + 3x + k$ is divided by $(x - 1)$,
the remainder obtained is 3, then the value of 'k' is

اگر کثیر رکنی $p(x) = x^3 - x^2 + 3x + k$ کو $(x - 1)$ سے تقسیم کرنے پر 3 باقی بچتا ہو
تب K کی قدر ہوگی

Options :

1. ✔ 0

2. ✖ 1

3. ✖ 3

4. ✖ -3

Question Number : 4 Question Id : 381906608 Question Type : MCQ Option Shuffling : No
Display Question Number : Yes Is Question Mandatory : No Calculator : None Response Time
: N.A Think Time : N.A Minimum Instruction Time : 0

Correct Marks : 1 Wrong Marks : 0

Among the following, a number which is exactly divisible by 8

ذیل میں وہ عدد جو 8 سے مکمل تقسیم ہوتا ہے:

Options :

1. ✘ 32466

2. ✘ 32476

3. ✘ 32486

4. ✔ 32456

Question Number : 5 Question Id : 381906609 Question Type : MCQ Option Shuffling : No
Display Question Number : Yes Is Question Mandatory : No Calculator : None Response Time
: N.A Think Time : N.A Minimum Instruction Time : 0

Correct Marks : 1 Wrong Marks : 0

The value of $\sec 16^\circ \operatorname{cosec} 74^\circ - \cot 74^\circ \tan 16^\circ$ is

کی قدر ہوگی $\sec 16^\circ \operatorname{cosec} 74^\circ - \cot 74^\circ \tan 16^\circ$

Options :

1. ✔ 0

2. ✘ 1

3. ✘ 2

4. ✘ $\frac{1}{2}$

Question Number : 6 Question Id : 381906610 Question Type : MCQ Option Shuffling : No
Display Question Number : Yes Is Question Mandatory : No Calculator : None Response Time
: N.A Think Time : N.A Minimum Instruction Time : 0

Correct Marks : 1 Wrong Marks : 0

The value of 'k' for which the pair of equations $3x + 2y = 6$ and $9x + ky = 7$
will become inconsistent is

'k' کی کوئی قدر کے لئے مساواتوں $3x + 2y = 6$ اور $9x + ky = 7$ کا جوڑے آہنگ ہوتا ہے

Options :

1. ✖ 8

2. ✖ 7

3. ✔ 6

4. ✖ 5

Question Number : 7 Question Id : 381906611 Question Type : MCQ Option Shuffling : No
Display Question Number : Yes Is Question Mandatory : No Calculator : None Response Time
: N.A Think Time : N.A Minimum Instruction Time : 0

Correct Marks : 1 Wrong Marks : 0

If a number is 132 smaller than its square, then the number is

اگر کوئی عدد اپنے مربع سے 132 چھوٹا ہو تب وہ عدد ہوگا

Options :

1. ✖ 11

2. ✖ 8

3. ✘ 9

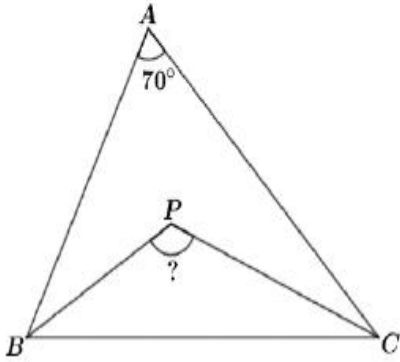
4. ✔ 12

Question Number : 8 Question Id : 381906612 Question Type : MCQ Option Shuffling : No
Display Question Number : Yes Is Question Mandatory : No Calculator : None Response Time
: N.A Think Time : N.A Minimum Instruction Time : 0

Correct Marks : 1 Wrong Marks : 0

In triangle ABC, $\angle A = 70^\circ$. If BP and CP are angular bisectors of $\angle B$ and $\angle C$ respectively, then the measure of $\angle BPC$ is

مثلاً ABC میں $\angle A = 70^\circ$ اگر BP اور CP بالترتیب $\angle B$ اور $\angle C$ کے ناقف ہوں تب $\angle BPC$ کی پیمائش ہوگی



Options :

1. ✘ 70°

2. ✔ 125°

3. ✘ 55°

4. ✘ 140°

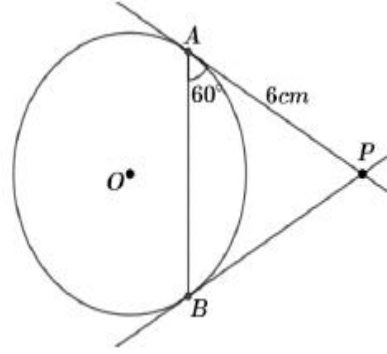
Question Number : 9 Question Id : 381906613 Question Type : MCQ Option Shuffling : No
Display Question Number : Yes Is Question Mandatory : No Calculator : None Response Time
: N.A Think Time : N.A Minimum Instruction Time : 0

Correct Marks : 1 Wrong Marks : 0

In the given figure, PA and PB are tangents to the circle with center 'O'. If PA = 6 cm and $\angle PAB = 60^\circ$ then the length of chord AB (in cm) is

دی گئی شکل میں PA اور PB دائرے کے مرکز 'O' سے مماس ہیں۔ اگر

PA = 6 cm اور $\angle PAB = 60^\circ$ تب وتر AB کا طول (سمروں میں)



Options :

1. ✓ 6

2. ✗ 5

3. ✗ 7

4. ✗ 4

Question Number : 10 Question Id : 381906614 Question Type : MCQ Option Shuffling : No
Display Question Number : Yes Is Question Mandatory : No Calculator : None Response Time
: N.A Think Time : N.A Minimum Instruction Time : 0

Correct Marks : 1 Wrong Marks : 0

The common difference of an arithmetic progression in which $a_{25} - a_{12} = -52$ is

حسابی تصاعد کا فرق مشترک جس میں $a_{25} - a_{12} = -52$

Options :

1. ✓ - 4

2. ✖ 4

3. ✖ 3

4. ✖ -3

Question Number : 11 Question Id : 381906615 Question Type : MCQ Option Shuffling : No
Display Question Number : Yes Is Question Mandatory : No Calculator : None Response Time
: N.A Think Time : N.A Minimum Instruction Time : 0

Correct Marks : 1 Wrong Marks : 0

If $2^{7x-7} = 1$, then the value of 'x' is

اگر $2^{7x-7} = 1$ تب 'x' کی قدر ہوگی

Options :

1. ✔ 1

2. ✖ 2

3. ✖ 0

4. ✖ 3

Question Number : 12 Question Id : 381906616 Question Type : MCQ Option Shuffling : No
Display Question Number : Yes Is Question Mandatory : No Calculator : None Response Time
: N.A Think Time : N.A Minimum Instruction Time : 0

Correct Marks : 1 Wrong Marks : 0

If the perimeters of two similar triangles are 20 cm and 30 cm respectively, then the ratio of their areas in the same order is

اگر دو مشابہہ مثلثات کا احاطہ بالترتیب 20 سم اور 30 سم ہو تب ان کے رقبوں کی نسبت ہوگی

Options :

1. ✘ 2 : 3

2. ✘ 3 : 2

3. ✔ 4 : 9

4. ✘ 9 : 4

Question Number : 13 Question Id : 381906617 Question Type : MCQ Option Shuffling : No Display Question Number : Yes Is Question Mandatory : No Calculator : None Response Time : N.A Think Time : N.A Minimum Instruction Time : 0

Correct Marks : 1 Wrong Marks : 0

The compound interest on ₹ 1000 at 10 % per annum compounded annually for 2 years is

1000 روپوں پر 10% سالانہ شرح سود سے 2 سال کے لئے سود مرکب ہوگا

Options :

1. ✘ ₹ 1200

2. ✘ ₹ 200

3. ✔ ₹ 210

4. ✘ ₹ 1210

Question Number : 14 Question Id : 381906618 Question Type : MCQ Option Shuffling : No
Display Question Number : Yes Is Question Mandatory : No Calculator : None Response Time
: N.A Think Time : N.A Minimum Instruction Time : 0

Correct Marks : 1 Wrong Marks : 0

Sum of the distances from A (3,4) to X axis and from B (5,7) to Y axis is

(3,4) سے X محور اور (5,7) سے Y محور کے فاصلوں کا مجموعہ ہوگا

Options :

1. ✘ 8

2. ✘ 10

3. ✘ 11

4. ✔ 9

Question Number : 15 Question Id : 381906619 Question Type : MCQ Option Shuffling : No
Display Question Number : Yes Is Question Mandatory : No Calculator : None Response Time
: N.A Think Time : N.A Minimum Instruction Time : 0

Correct Marks : 1 Wrong Marks : 0

If a car travels 80 km with 5 liters of petrol, then distance (in km) covered by it
with 15 liters of petrol is

اگر ایک کار 80 km کا فاصلہ 5 لیٹر پٹرول میں طے کرتی ہو تب وہ 15 لیٹر پٹرول میں کتنا فاصلہ طے کرے گی (km میں)

Options :

1. ✘ 400

2. ✔ 240

3. ✖ 200

4. ✖ 100

Question Number : 16 Question Id : 381906620 Question Type : MCQ Option Shuffling : No
Display Question Number : Yes Is Question Mandatory : No Calculator : None Response Time
: N.A Think Time : N.A Minimum Instruction Time : 0

Correct Marks : 1 Wrong Marks : 0

If a card is drawn from a well shuffled deck of 52 cards, then the probability of getting a black king is

52 پتوں میں سے اگر ایک پتہ کو بلا منصوبہ نکالا جائے تب اس کے سیاہ کنگ ہونے کا قیاس

Options :

1. ✖ $\frac{1}{52}$

2. ✖ $\frac{1}{4}$

3. ✔ $\frac{1}{26}$

4. ✖ $\frac{1}{13}$

Question Number : 17 Question Id : 381906621 Question Type : MCQ Option Shuffling : No
Display Question Number : Yes Is Question Mandatory : No Calculator : None Response Time
: N.A Think Time : N.A Minimum Instruction Time : 0

Correct Marks : 1 Wrong Marks : 0

A sphere is exactly fitted in a cube of edge 'a' units, then the volume of the sphere (in cubic units) is

ایک کرہ 'a' کنارے والے مکعب میں مکمل فٹ ہوتا ہو تب اس کرہ کا حجم (مکعب اکائیوں میں)

Options :

1. ✘ $\frac{1}{3}\pi a^3$

2. ✔ $\frac{1}{6}\pi a^3$

3. ✘ $\frac{4}{3}\pi a^3$

4. ✘ $\frac{8}{3}\pi a^3$

Question Number : 18 Question Id : 381906622 Question Type : MCQ Option Shuffling : No
Display Question Number : Yes Is Question Mandatory : No Calculator : None Response Time
: N.A Think Time : N.A Minimum Instruction Time : 0

Correct Marks : 1 Wrong Marks : 0

If $A = \{x: x \in N, 2 < x \leq 7\}$, then the roster form of set A is

اگر $A = \{x: x \in N, 2 < x \leq 7\}$ تب A کی روستر شکل ہوگی

Options :

1. ✘ $\{2, 3, 4, 5, 6, 7\}$

2. ✘ $\{3, 4, 5, 6\}$

3. ✘ $\{2, 3, 4, 5, 6\}$

4.

✓ { 3, 4, 5, 6, 7 }

Question Number : 19 Question Id : 381906623 Question Type : MCQ Option Shuffling : No
Display Question Number : Yes Is Question Mandatory : No Calculator : None Response Time
: N.A Think Time : N.A Minimum Instruction Time : 0

Correct Marks : 1 Wrong Marks : 0

The mean of five (5) observations is 12. If 4 is subtracted from each observation, then the mean of the new observations formed is

5 مشاہدات کا اوسط 12 ہے۔ اگر ہر مشاہدے سے 4 کو تفریق کیا گیا تو نئے مشاہدات کا اوسط ہوگا

Options :

1. ✖ 9

2. ✖ 7

3. ✓ 8

4. ✖ 16

Question Number : 20 Question Id : 381906624 Question Type : MCQ Option Shuffling : No
Display Question Number : Yes Is Question Mandatory : No Calculator : None Response Time
: N.A Think Time : N.A Minimum Instruction Time : 0

Correct Marks : 1 Wrong Marks : 0

Marked price of a shirt is ₹ 1450. If 10% discount is given, then the selling price of the shirt is

ایک شرٹ کی مارکٹ قیمت 1450 روپے ہے۔ اگر 10% ڈسکانٹ دیں تب اس کی قیمت فروخت ہوگی

Options :

1. ✖ ₹ 1350

2. ✓ ₹ 1305

3. ✘ ₹ 1035

4. ✘ ₹ 1053

Question Number : 21 Question Id : 381906625 Question Type : MCQ Option Shuffling : No
Display Question Number : Yes Is Question Mandatory : No Calculator : None Response Time
: N.A Think Time : N.A Minimum Instruction Time : 0

Correct Marks : 1 Wrong Marks : 0

Choose the correct statements from the following about the nature of poles of magnets.

مقناطیس کے قطب کی فطرت کے بارے میں ذیل میں صحیح بیان کا انتخاب کیجئے

i. South pole attracts South pole

جنوبی قطب، جنوبی قطب کو کشش کرتا ہے

ii. South pole repels South pole

جنوبی قطب، جنوبی قطب کو دفع کرتا ہے

iii. North pole attracts North pole

شمالی قطب، شمالی قطب کو کشش کرتا ہے

iv. North pole repels North pole

شمالی قطب، شمالی قطب کو دفع کرتا ہے

Options :

1. ✘ i,iii

2. ✘ i, iv

3. ✘ ii, iii

4. ✓ ii, iv

Question Number : 22 Question Id : 381906626 Question Type : MCQ Option Shuffling : No
Display Question Number : Yes Is Question Mandatory : No Calculator : None Response Time
: N.A Think Time : N.A Minimum Instruction Time : 0

Correct Marks : 1 Wrong Marks : 0

$Zn + Hcl \rightarrow Zncl_2 + H_2$ is an example for
ایک مثال ہے $Zn + Hcl \rightarrow Zncl_2 + H_2$

Options :

Chemical combination

1. ✘ کیسائی ترکیب

Chemical decomposition

2. ✘ کیسائی تحلیل

Displacement reaction

3. ✓ علیحدگی تعامل

Double displacement reaction

4. ✘ دوہرا علیحدگی کا تعامل

Question Number : 23 Question Id : 381906627 Question Type : MCQ Option Shuffling : No
Display Question Number : Yes Is Question Mandatory : No Calculator : None Response Time
: N.A Think Time : N.A Minimum Instruction Time : 0

Correct Marks : 1 Wrong Marks : 0

We see the formation of small drops of water on the outer surface of a glass which has chilled water in it. This is an example for

ایک گلاس میں ٹھنڈا پانی موجود ہو تو ہم اس کی بیرونی سطح پر پانی کے ننھے قطرات کا مشاہدہ کرتے ہیں۔ یہ ایک مثال ہے

Options :

Evaporation

1. ✘ تبخیر

Condensation

2. ✔ تکثیف

Melting

3. ✘ اجماع

Crystallization

4. ✘ قلمائو

Question Number : 24 Question Id : 381906628 Question Type : MCQ Option Shuffling : No
Display Question Number : Yes Is Question Mandatory : No Calculator : None Response Time
: N.A Think Time : N.A Minimum Instruction Time : 0

Correct Marks : 1 Wrong Marks : 0

Symbol for Sodium element

سوڈیم کے عنصر کی علامت ہے۔

Options :

1. ✘ S

2. ✘ So

3. ✘ N

4. ✔ Na

Question Number : 25 Question Id : 381906629 Question Type : MCQ Option Shuffling : No
Display Question Number : Yes Is Question Mandatory : No Calculator : None Response Time
: N.A Think Time : N.A Minimum Instruction Time : 0

Correct Marks : 1 Wrong Marks : 0

According to the driver of a moving bus, the passenger in that bus is

ایک چلتی بس کے ڈرائیور کے مطابق اس بس میں موجود مسافر

Options :

Moving with acceleration

1. ✘ تیزی سے حرکت کرتا ہے

Moving with Uniform speed

2. ✘ یکساں رفتار سے حرکت کرتا ہے

Moving with Non-Uniform speed

3. ✘ غیر یکساں رفتار سے حرکت کرتا ہے

At rest

4. ✔ حالت سکون میں ہوتا ہے

Question Number : 26 Question Id : 381906630 Question Type : MCQ Option Shuffling : No
Display Question Number : Yes Is Question Mandatory : No Calculator : None Response Time
: N.A Think Time : N.A Minimum Instruction Time : 0

Correct Marks : 1 Wrong Marks : 0

Units used for temperature in clinical thermometer

طبی تپش پیمائش کیلئے استعمال کی جانے والی اکائی

Options :

1. ✘ °C

2. ✔ °F

3. ✘ °K

4. ✘ K

Question Number : 27 Question Id : 381906631 Question Type : MCQ Option Shuffling : No

Display Question Number : Yes Is Question Mandatory : No Calculator : None Response Time

: N.A Think Time : N.A Minimum Instruction Time : 0

Correct Marks : 1 Wrong Marks : 0

Which of the following is called artificial silk?

ذیل میں سے مصنوعی ریشم کہتے ہیں؟

Options :

Nylon

1. ✘ نائیلاں

Polyester

2. ✘ پولیسٹر

Rayon

3. ✔ ریان

Acrylic

4. ✘ اکرلین

Question Number : 28 Question Id : 381906632 Question Type : MCQ Option Shuffling : No
Display Question Number : Yes Is Question Mandatory : No Calculator : None Response Time
: N.A Think Time : N.A Minimum Instruction Time : 0

Correct Marks : 1 Wrong Marks : 0

The reason for a rolling ball on the ground come to rest after some time

زمین پر لڑھکتا ہوا گولا کچھ دیر بعد ساکن ہو جاتا ہے۔ اسکی وجہ

Options :

Gravitational force

1. ✘ قوت جاذبہ

Friction

2. ✔ رگڑ

Lack of acceleration

3. ✘ اسراع کی کمی

Lack of velocity

4. ✘ رفتار کی کمی

Question Number : 29 Question Id : 381906633 Question Type : MCQ Option Shuffling : No
Display Question Number : Yes Is Question Mandatory : No Calculator : None Response Time
: N.A Think Time : N.A Minimum Instruction Time : 0

Correct Marks : 1 Wrong Marks : 0

The substances that turn blue litmus to red litmus are

وہ شے جو نیلے لٹمس کو سرخ لٹمس میں تبدیل کرتی ہے

Options :

Acidic in nature

1. ✓ فطری طور پر ترشی

Basic in nature

2. ✗ اساسی فطرت

Neutral in nature

3. ✗ فطری طور پر نیوٹرل

Metalic in nature

4. ✗ فطری طور پر دھاتی

Question Number : 30 Question Id : 381906634 Question Type : MCQ Option Shuffling : No

Display Question Number : Yes Is Question Mandatory : No Calculator : None Response Time

: N.A Think Time : N.A Minimum Instruction Time : 0

Correct Marks : 1 Wrong Marks : 0

Sound do not travel in

آواز اس میں سفر نہیں کرتی

Options :

Vaccum

1. ✓ خلاء

2. ✗

Water

پانی

Wood

3. ✘ لکڑی

Air

4. ✘ ہوا

Question Number : 31 Question Id : 381906635 Question Type : MCQ Option Shuffling : No
Display Question Number : Yes Is Question Mandatory : No Calculator : None Response Time
: N.A Think Time : N.A Minimum Instruction Time : 0

Correct Marks : 1 Wrong Marks : 0

Which among the following is NOT a water borne disease?

ذیل میں سے ایک پانی سے ہونے والی بیماری نہیں ہے

Options :

Cholera

1. ✘ ہیضہ

Typhoid

2. ✘ ٹائفائیڈ

Dysentery

3. ✘ ڈیسنٹری

4. ✔

Pneumonia

شموئیا

Question Number : 32 Question Id : 381906636 Question Type : MCQ Option Shuffling : No
Display Question Number : Yes Is Question Mandatory : No Calculator : None Response Time
: N.A Think Time : N.A Minimum Instruction Time : 0

Correct Marks : 1 Wrong Marks : 0

Identify the INCORRECT pair from the following

ذیل میں غلط جوڑ کی شناخت کیجئے

Options :

- | | | | |
|------|------------------------------|---|--|
| 1. ✘ | Gibberellin گبرلن | - | Stimulation of flowering گل کاری کی تحریک |
| 2. ✔ | Ethylene ایتھیلین | - | Promotes aging of leaves پتوں میں سن رسیدگی کو فروغ دیتا ہے |
| 3. ✘ | Abscisic acid ایبسیک ترشہ | - | Closing of stomata دھنوں کا بند ہونا |
| 4. ✘ | Cytokinins سائٹوکائین | - | Opening of stomata دھنوں کا کھلنا |

Question Number : 33 Question Id : 381906637 Question Type : MCQ Option Shuffling : No
Display Question Number : Yes Is Question Mandatory : No Calculator : None Response Time
: N.A Think Time : N.A Minimum Instruction Time : 0

Correct Marks : 1 Wrong Marks : 0

The part of Human sperm cell occupied by numerous mitochondria is

انسانی منویے کا وہ حصہ جس پر متعدد مائٹوکونڈریا پائے جاتے ہیں۔

Options :

Tail

1. ✘ دم

Neck

2. ✘ گردن

Head

3. ✘ سر

Middle piece

4. ✔ درمیانی حصہ

Question Number : 34 Question Id : 381906638 Question Type : MCQ Option Shuffling : No
Display Question Number : Yes Is Question Mandatory : No Calculator : None Response Time
: N.A Think Time : N.A Minimum Instruction Time : 0

Correct Marks : 1 Wrong Marks : 0

Identify the CORRECT Sentence from the following

ذیل میں صحیح جملے کی شناخت کیجئے

Options :

Marine mammals have blubber for losing heat from their body

1. ✘ سمندری پستانوں میں جسم سے گرمی ختم کرنے کیلئے بلبھر ہوتے ہیں

Shrinking of lungs is disadvantage to aquatic mammals

2. ✘ شش کا سکڑنا آبی پستانوں کے لئے نقصان دہ ہوتا ہے

Bottom dwellers rely mostly on smell and auditory senses rather than vision to acquire food

3. ✓ تمہ میں رہنے والے آبی حیوانات زیادہ تر سونگھنے اور سمعی حس پر غذا کے حصول کے لئے انحصار کرتے ہیں بجائے بصارت کے

For every 10 metres depth in the sea water pressure decreases by one atmosphere

4. ✗ سمندر میں ہر 10 میٹر گہرائی کے لئے پانی کا دباؤ ایک ہوائی کرہ گھٹتا ہے

Question Number : 35 Question Id : 381906639 Question Type : MCQ Option Shuffling : No
Display Question Number : Yes Is Question Mandatory : No Calculator : None Response Time : N.A Think Time : N.A Minimum Instruction Time : 0

Correct Marks : 1 Wrong Marks : 0

Which of the following plant is NOT endangered species?

مندرجہ ذیل میں سے کونسا پودا خطرے سے دوچار نہیں ہے؟

Options :

Orchid

1. ✗ آرکڈ

Water hyacinth

2. ✓ واٹر حیا سنتھ

Rouwalfia serpentina

3. ✗ راولفیا سرپینٹینا

Cycas

4. ✗ سائیکاس

Question Number : 36 Question Id : 381906640 Question Type : MCQ Option Shuffling : No
Display Question Number : Yes Is Question Mandatory : No Calculator : None Response Time
: N.A Think Time : N.A Minimum Instruction Time : 0

Correct Marks : 1 Wrong Marks : 0

The percentage of Nitrogen gas in the air is ...

ہوا میں نائٹروجن گیس کا فیصد ہے۔

Options :

21 percent

1. ✘ 21 فیصد

78 percent

2. ✔ 78 فیصد

87 percent

3. ✘ 87 فیصد

12 percent

4. ✘ 12 فیصد

Question Number : 37 Question Id : 381906641 Question Type : MCQ Option Shuffling : No
Display Question Number : Yes Is Question Mandatory : No Calculator : None Response Time
: N.A Think Time : N.A Minimum Instruction Time : 0

Correct Marks : 1 Wrong Marks : 0

Dandelion plant seeds are dispersed through

ڈانڈیلین پودے کے بیجوں کا انتشار اس کے ذریعہ ہوتا ہے

Options :

Wind

1. ✓ ہوا

Water

2. ✘ پانی

Animals

3. ✘ حیوانات

Bursting of fruits

4. ✘ پھلوں کا شق ہونا

Question Number : 38 Question Id : 381906642 Question Type : MCQ Option Shuffling : No
Display Question Number : Yes Is Question Mandatory : No Calculator : None Response Time
: N.A Think Time : N.A Minimum Instruction Time : 0

Correct Marks : 1 Wrong Marks : 0

Identify the CORRECT pair from the following

ذیل میں سے صحیح جوڑ کی شناخت کیجئے

Options :

1. ✘ Tocopherol - Severe bleeding
ٹوکوفیرال شدید خون بہنا

2. ✘ Ascorbic acid - Anaemia
ایسکاربک ترشہ فقر الدم

3. ✓

Retinol - Night blindness

ریٹینال

شب کوری

Calciferol - Sterility

4. ✘ کیا سیفرال

بانجھ پن

Question Number : 39 Question Id : 381906643 Question Type : MCQ Option Shuffling : No
Display Question Number : Yes Is Question Mandatory : No Calculator : None Response Time : N.A Think Time : N.A Minimum Instruction Time : 0

Correct Marks : 1 Wrong Marks : 0

Lichens are formed by the symbiotic association of

لائگننس ان کے ہم باش اشتراک کے ذریعہ تشکیل پاتے ہیں

Options :

Algae and fungi

1. ✔ آلی اور فنجی

Bacteria and virus

2. ✘ بیکٹیریا اور وائرس

Fungi and bacteria

3. ✘ فنجی اور بیکٹیریا

Virus and Algae

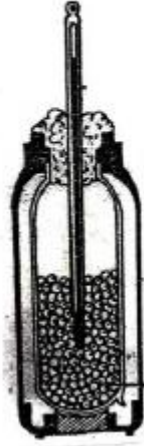
4. ✘ وائرس اور آلی

Question Number : 40 Question Id : 381906644 Question Type : MCQ Option Shuffling : No
Display Question Number : Yes Is Question Mandatory : No Calculator : None Response Time : N.A Think Time : N.A Minimum Instruction Time : 0

Correct Marks : 1 Wrong Marks : 0

The experiment given in the picture illustrates

دی گئی تصویر میں تجربہ وضاحت کرتا ہے



Options :

Light is necessary for photosynthesis

1. ✘ شعاعی ترکیب کے لئے روشنی ضروری ہے

Carbondioxide is necessary for photosynthesis

2. ✘ شعاعی ترکیب کے لئے کاربن ڈائی آکسائیڈ ضروری ہے

Oxygen is released during respiration

3. ✘ تنفس کے دوران آکسیجن خارج ہوتی ہے

Heat is evolved during respiration

4. ✔ تنفس کے دوران حرارت کا اخراج ہوتا ہے

Question Number : 41 Question Id : 381906645 Question Type : MCQ Option Shuffling : No
Display Question Number : Yes Is Question Mandatory : No Calculator : None Response Time

: N.A Think Time : N.A Minimum Instruction Time : 0

Correct Marks : 1 Wrong Marks : 0

Which of the following town is located in the lower Telangana plateau?

مندرجہ ذیل میں سے کون سا شہر زیریں تلنگانہ سطح مرتفع میں واقع ہے؟

Options :

Warangal

1. ✓ ورنگل

Nalgonda

2. ✗ نلگنڈہ

Mahabubnagar

3. ✗ محبوب نگر

Hyderabad

4. ✗ حیدرآباد

Question Number : 42 Question Id : 381906646 Question Type : MCQ Option Shuffling : No

Display Question Number : Yes Is Question Mandatory : No Calculator : None Response Time

: N.A Think Time : N.A Minimum Instruction Time : 0

Correct Marks : 1 Wrong Marks : 0

Mchrauli Iron Pillar is in:

مہرولی لوہے کا ستون واقع ہے

Options :

Fathepur Sikri

1. ✗ فتح پور سیکری

Qutub Minar Complex

2. ✓ قطب مینار کا مینکس

Red fort

3. ✗ لال قلعہ

Sanchi Stupa

4. ✗ سانچی اسٹوپا

Question Number : 43 Question Id : 381906647 Question Type : MCQ Option Shuffling : No
Display Question Number : Yes Is Question Mandatory : No Calculator : None Response Time
: N.A Think Time : N.A Minimum Instruction Time : 0

Correct Marks : 1 Wrong Marks : 0

Find odd one:

مختلف کو پہچانئے:

Options :

Kalibangan

1. ✗ کالی بنگن

Mohenjo Daro

2. ✓ موہن جو دارو

Lothal

3. ✗ لو تھل

Surkotada

4. ✗ سر کوتاڈا

Question Number : 44 Question Id : 381906648 Question Type : MCQ Option Shuffling : No
Display Question Number : Yes Is Question Mandatory : No Calculator : None Response Time
: N.A Think Time : N.A Minimum Instruction Time : 0

Correct Marks : 1 Wrong Marks : 0

i. He is popularly known as Rao Saheb

یہ راؤ صاحب کے نام سے مشہور ہیں

ii. In Nizam's Government he worked in PWD department

نظام حکومت میں انہوں نے PWD میں کام کیا

iii. He presided over Bombay Presidency Mahar Conference in 1936. Who is he?

1936 میں انہوں نے بمبے پریزیڈنسی مہار کانفرنس کی صدارت کی۔ یہ کون ہیں؟

Options :

Dr. B. R. Ambedkar

ڈاکٹر بی آر امبیڈکر

1. ✘

B.S. Venkat Rao

بی ایس وینکٹ راؤ

2. ✔

Ramaswamy Iyengar

راماسوامی آئیئرنگر

3. ✘

Bhagya Reddy Varma

بھاگیہ ریڈی ورما

4. ✘

Question Number : 45 Question Id : 381906649 Question Type : MCQ Option Shuffling : No
Display Question Number : Yes Is Question Mandatory : No Calculator : None Response Time

: N.A Think Time : N.A Minimum Instruction Time : 0

Correct Marks : 1 Wrong Marks : 0

Match the following:

جوڑ لگائیے:

Kingdom

Capital

- | | | | |
|------|----------------------|-----|--------------------------|
| i. | Bahmani حکومت | a). | Vijayanagara پایہ تخت |
| ii. | Saluva بہمنی | b). | Golkonda وہجے نگر |
| iii. | Qutubshahi سالووا | c). | Gulbarga گو لکنڈہ |
| iv. | Chola قطب شاہی | d). | Tanjore گلبرگہ |
| | چولا | | تنجاورو |

Options :

1. ✘ i-a, ii-b, iii-c, iv-d

2. ✘ i-d, ii-c, iii-b, iv-a

3. ✘ i-b, ii-c, iii-a, iv-d

4. ✔ i-c, ii-a, iii-b, iv-d

Question Number : 46 Question Id : 381906650 Question Type : MCQ Option Shuffling : No

Display Question Number : Yes Is Question Mandatory : No Calculator : None Response Time

: N.A Think Time : N.A Minimum Instruction Time : 0

Correct Marks : 1 Wrong Marks : 0

Every day rhythmic rise and fall in the level of ocean water is called as

ہر روز سمندری پانی کی سطح میں وقفہ وقفہ سے چڑھاؤ اور اتار کو کہتے ہیں

Options :

Tides

1. ✓ مد و جزر

Currents

2. ✗ روئیں

Waves

3. ✗ موجیں

Tsunami

4. ✗ سونامی

Question Number : 47 Question Id : 381906651 Question Type : MCQ Option Shuffling : No
Display Question Number : Yes Is Question Mandatory : No Calculator : None Response Time
: N.A Think Time : N.A Minimum Instruction Time : 0

Correct Marks : 1 Wrong Marks : 0

An Important source for historians Kitab-al-Hind was written by

مؤرخین کے لئے ایک اہم ذریعہ "کتاب الہند" کو انہوں نے لکھا

Options :

Mohammad Ghori

1. ✗ محمد غوری

Alberuni

2. ✓ البیرونی

Babar

3. ✘ بابر

Fa-Hien

4. ✘ فہیان

Question Number : 48 Question Id : 381906652 Question Type : MCQ Option Shuffling : No
Display Question Number : Yes Is Question Mandatory : No Calculator : None Response Time
: N.A Think Time : N.A Minimum Instruction Time : 0

Correct Marks : 1 Wrong Marks : 0

To attain Purna Swarajya, Congress launched the following movement

پورنا سواراج (مکمل آزادی) کو حاصل کرنے کے لئے کانگریس نے یہ تحریک شروع کی

Options :

Home Rule

1. ✘ ہوم رول

Khilafat

2. ✘ خلافت

Civil disobedience

3. ✔ سیول نافرمانی

Vandemataram

4. ✘ وندے ماترم

Question Number : 49 Question Id : 381906653 Question Type : MCQ Option Shuffling : No

Display Question Number : Yes Is Question Mandatory : No Calculator : None Response Time : N.A Think Time : N.A Minimum Instruction Time : 0

Correct Marks : 1 Wrong Marks : 0

The following State has only one Lok Sabha constituency

درج ذیل ریاست کے لئے صرف ایک پارلیمانی حلقہ ہے

Options :

Tripura

1. ✘ تریپورہ

Sikkim

2. ✔ سکیم

Meghalaya

3. ✘ میگھالیہ

Manipur

4. ✘ منی پور

Question Number : 50 Question Id : 381906654 Question Type : MCQ Option Shuffling : No

Display Question Number : Yes Is Question Mandatory : No Calculator : None Response Time : N.A Think Time : N.A Minimum Instruction Time : 0

Correct Marks : 1 Wrong Marks : 0

Nayankara System was followed by :

نایکرا نظام پر انہوں نے عمل کیا:

Options :

Kakatiyas

1. ✔ کاکتھیہ

Cholas

2. ✘ چولا

Nizam rulers

3. ✘ نظام حکمران

Satavahanas

4. ✘ ساتاواہنا

Question Number : 51 Question Id : 381906655 Question Type : MCQ Option Shuffling : No
Display Question Number : Yes Is Question Mandatory : No Calculator : None Response Time
: N.A Think Time : N.A Minimum Instruction Time : 0

Correct Marks : 1 Wrong Marks : 0

_____ is responsible for the regulating the debates and proceedings
of the state Assembly

----- ریاستی اسمبلی میں مباحث اور پروسیڈنگ کو کنٹرول کرنے کے لئے ذمہ دار ہوتے ہیں

Options :

Speaker

1. ✔ اسپیکر

Chief Minister

2. ✘ چیف منسٹر

Governor

3. ✘ گورنر

Deputy Chief Minister

4. ✘ ڈپٹی چیف منسٹر

Question Number : 52 Question Id : 381906656 Question Type : MCQ Option Shuffling : No
Display Question Number : Yes Is Question Mandatory : No Calculator : None Response Time
: N.A Think Time : N.A Minimum Instruction Time : 0

Correct Marks : 1 Wrong Marks : 0

Choose the correct pairs

صحیح جوڑ کا انتخاب کیجئے

| Name of the Hot winds - گرم ہواؤں کا نام | Region علاقہ |
|---|-----------------------------------|
| i. Chinook - چنوک | a) Arabian desert عرب ریگستان |
| ii. Loo - لو | b) North India شمالی ہندوستان |
| iii. Simmon - سمون | c) USA – Canada امریکہ - کنیڈا |
| iv. Norwester - نورویسٹر | d) New Zealand نیوزی لینڈ |

Options :

1. ✘ i-a, ii-b, iii-c, iv-d

2. ✔ i-c, ii-b, iii-a, iv-d

3. ✘ i-a, ii-c, iii-d, iv-b

4. ✘ i-c, ii-a, iii-b, iv-d

Question Number : 53 Question Id : 381906657 Question Type : MCQ Option Shuffling : No

Display Question Number : Yes Is Question Mandatory : No Calculator : None Response Time : N.A Think Time : N.A Minimum Instruction Time : 0

Correct Marks : 1 Wrong Marks : 0

The largest continental shelf is present in the following ocean

سب سے بڑا براعظمی شیلیف اس بحر اعظم میں واقع ہے

Options :

Pacific Ocean

1. ✘ بحر الکاہل

Arctic Ocean

2. ✔ بحر منجمد شمالی

Atlantic Ocean

3. ✘ بحر وقیانوس

Indian Ocean

4. ✘ بحر ہند

Question Number : 54 Question Id : 381906658 Question Type : MCQ Option Shuffling : No

Display Question Number : Yes Is Question Mandatory : No Calculator : None Response Time : N.A Think Time : N.A Minimum Instruction Time : 0

Correct Marks : 1 Wrong Marks : 0

Boers means

بوئرس مراد

Options :

British People living in cape town

1. ✘ برطانوی لوگ جو کیپ ٹاؤن میں رہتے ہیں

Africans lived in the Cape of Good hope region

2. ✓

آفریقی جو کیپ آف گوڈ ہوپ کے علاقہ میں رہتے ہیں

Dutch people lived in South Africa

3. ✘

ساوتھ آفریقہ میں رہنے والے ڈوچ لوگ

The African tribes

4. ✘

آفریقی قبائل

Question Number : 55 Question Id : 381906659 Question Type : MCQ Option Shuffling : No
Display Question Number : Yes Is Question Mandatory : No Calculator : None Response Time
: N.A Think Time : N.A Minimum Instruction Time : 0

Correct Marks : 1 Wrong Marks : 0

If highest number of votes are polled for [NOTA] then:

اگر [NOTA] کے لئے زیادہ ووٹ ڈالے جاتے ہیں تب

Options :

The elections would be cancelled

1. ✘

الکشن رد کر دیے جائیں گے

The candidate who secured second position would be declared as winner'

2. ✓

وہ امیدوار جس نے دوسری پوزیشن حاصل کی اسے کامیاب قرار دیا جائے گا

Re- election would be conducted with same candidates

3. ✘

انہی امیدواروں کے ساتھ دوبارہ الکشن کرایا جائے گا

Election commission have the right to declare any candidate as winner

4. ✘

الکشن کمیشن کو یہ حق حاصل ہوگا کہ وہ کسی بھی امیدوار کو کامیاب قرار دیں

Question Number : 56 Question Id : 381906660 Question Type : MCQ Option Shuffling : No
Display Question Number : Yes Is Question Mandatory : No Calculator : None Response Time
: N.A Think Time : N.A Minimum Instruction Time : 0

Correct Marks : 1 Wrong Marks : 0

According to the Indian Constitution life is in the following Article

ہندوستانی آئین کے مطابق ”زندگی“ اس دفع میں شامل ہے

Options :

Article 13

1. ✘ 13 دفعہ

Article 21

2. ✔ 21 دفعہ

Article 11

3. ✘ 11 دفعہ

Article 3

4. ✘ 3 دفعہ

Question Number : 57 Question Id : 381906661 Question Type : MCQ Option Shuffling : No
Display Question Number : Yes Is Question Mandatory : No Calculator : None Response Time
: N.A Think Time : N.A Minimum Instruction Time : 0

Correct Marks : 1 Wrong Marks : 0

Disguised unemployment is noticed in

اس شعبے میں بے روزگاری بہت زیادہ ہے

Options :

Agriculture sector

1. ✓ ذراعتی شعبہ

Industrial sector

2. ✘ صنعتی شعبہ

Service sector

3. ✘ خدمات کا شعبہ

Foreign sector

4. ✘ خارجی شعبہ

Question Number : 58 Question Id : 381906662 Question Type : MCQ Option Shuffling : No
Display Question Number : Yes Is Question Mandatory : No Calculator : None Response Time
: N.A Think Time : N.A Minimum Instruction Time : 0

Correct Marks : 1 Wrong Marks : 0

Removing of trade barriers or restrictions set by the government is known as

حکومت کی جانب سے تجارت پر تحدیدات کو دور کرنا کہلاتا ہے

Options :

Privatisation

1. ✘ خانگیانہ

Globalisation

2. ✘ عالمیانہ

Liberalisation

3. ✓ آزادیانہ

Nationalisation

4. ✘ قومیاں

Question Number : 59 Question Id : 381906663 Question Type : MCQ Option Shuffling : No
Display Question Number : Yes Is Question Mandatory : No Calculator : None Response Time
: N.A Think Time : N.A Minimum Instruction Time : 0

Correct Marks : 1 Wrong Marks : 0

Human Development Index is published by

انسانی ترقیاتی فہرست کو شائع کرنے والا ادارہ ہے

Options :

World Trade Organization

1. ✘ ورلڈ ٹریڈ آرگنائزیشن

World Bank

2. ✘ ورلڈ بینک

UNICEF

3. ✘ یونیسف

UNDP

4. ✔ یو این ڈی پی

Question Number : 60 Question Id : 381906664 Question Type : MCQ Option Shuffling : No
Display Question Number : Yes Is Question Mandatory : No Calculator : None Response Time
: N.A Think Time : N.A Minimum Instruction Time : 0

Correct Marks : 1 Wrong Marks : 0

Related to Internet Banking, IFSC means

انٹرنیٹ بینکنگ میں IFSC سے مراد

Options :

1. ✘ Indian Financial Service Code
2. ✘ Indian Forex Service corporation
3. ✔ Indian Financial System code
4. ✘ Indian Financial system corporation

Teaching Aptitude

| | |
|--|-----------|
| Section Id : | 38190622 |
| Section Number : | 2 |
| Section type : | Online |
| Mandatory or Optional : | Mandatory |
| Number of Questions : | 20 |
| Number of Questions to be attempted : | 20 |
| Section Marks : | 20 |
| Enable Mark as Answered Mark for Review and Clear Response : | Yes |
| Maximum Instruction Time : | 0 |
| Sub-Section Number : | 1 |
| Sub-Section Id : | 38190626 |
| Question Shuffling Allowed : | Yes |
| Is Section Default? : | null |

Question Number : 61 Question Id : 381906665 Question Type : MCQ Option Shuffling : No
Display Question Number : Yes Is Question Mandatory : No Calculator : None Response Time
: N.A Think Time : N.A Minimum Instruction Time : 0

Correct Marks : 1 Wrong Marks : 0

What are the three basic characteristics of professionalism?

پیشہ واریت کی تین بنیادی خصوصیات کیا ہیں؟

Options :

specialized knowledge, ethics, and licensing

1. ✓

مخصوص علم، اخلاق اور اجازت نامہ

code, ethics, and licensing

2. ✘

ضابطہ، اخلاق اور اجازت نامہ

training, knowledge, and morals

3. ✘

تربیت، علم اور اخلاق

flexibility, relevance, and licensing

4. ✘

لچکداری، موزونیت، اجازت نامہ

Question Number : 62 Question Id : 381906666 Question Type : MCQ Option Shuffling : No
Display Question Number : Yes Is Question Mandatory : No Calculator : None Response Time
: N.A Think Time : N.A Minimum Instruction Time : 0

Correct Marks : 1 Wrong Marks : 0

The most significant component of effective teaching is to:

ایک موثر تدریس کا سب سے اہم عنصر ہے

Options :

1. ✘

Take attendance regularly

روز آنه حاضری لینا

Create a disciplined classroom environment

2. ✘

ایک پابند و سپن کمره جماعت کا ماحول تیار کرنا

Teachers' commitment and integrity

3. ✘

معلم کی ذمہ داری اور دیانت داری

Teacher's efforts to foster learning and understanding

4. ✔

اكتساب اور تفہیم کو فروغ دینے معلم کی کاوشیں

Question Number : 63 Question Id : 381906667 Question Type : MCQ Option Shuffling : No

Display Question Number : Yes Is Question Mandatory : No Calculator : None Response Time

: N.A Think Time : N.A Minimum Instruction Time : 0

Correct Marks : 1 Wrong Marks : 0

Questioning in teaching, is most useful in:

تدریس کے دوران سوالات کرنا، بہت فائدہ مند ہوتا ہے

Options :

Disciplining learners

1. ✘

طلباء کو پابند و سپن بنانے میں

Preparing learners for examination

2. ✘

امتحانات کے لئے طلباء کو تیار کرنے میں

Rote memorization of facts by learners

3. ✘

طلباء کو حقائق کو رٹے ہوئے یاد کرنے میں

Ensuring active participation of learners in class

کلاس میں طلباء کی فعال شراکت کو یقینی بنانے میں

4. ✓

Question Number : 64 Question Id : 381906668 Question Type : MCQ Option Shuffling : No
Display Question Number : Yes Is Question Mandatory : No Calculator : None Response Time
: N.A Think Time : N.A Minimum Instruction Time : 0

Correct Marks : 1 Wrong Marks : 0

Technology is essential in education because it:

تعلیم میں ٹکنالوجی ضروری ہے اس لئے کہ یہ

Options :

Makes teaching effective and efficient

تدریس کو موثر اور مفید بناتی ہے

1. ✓

Maintains high standards of education

تعلیم کے اعلیٰ معیارات کو قائم رکھتی ہے

2. ✘

Makes teaching less burdensome

تدریس کے بوجھ کو کم کرتی ہے

3. ✘

Is adopted by elite institutions

اس کو اعلیٰ اداروں کی جانب سے اپنایا جاتا ہے

4. ✘

Question Number : 65 Question Id : 381906669 Question Type : MCQ Option Shuffling : No
Display Question Number : Yes Is Question Mandatory : No Calculator : None Response Time
: N.A Think Time : N.A Minimum Instruction Time : 0

Correct Marks : 1 Wrong Marks : 0

The most important factor for the success of a new teacher is his / her:

ایک نئے ٹیچر کی کامیابی کے لئے سب سے اہم عامل ہوتا ہے

Options :

Attractive personality

1. ✘

جاذب نظر شخصیت

Sound knowledge of content and pedagogy

2. ✘

مواد اور طریقہ تدریس کا گہرا علم

Communication ability

3. ✔

ترسیلی مہارت

Organizational ability

4. ✘

تنظیمی قابلیت

Question Number : 66 Question Id : 381906670 Question Type : MCQ Option Shuffling : No

Display Question Number : Yes Is Question Mandatory : No Calculator : None Response Time

: N.A Think Time : N.A Minimum Instruction Time : 0

Correct Marks : 1 Wrong Marks : 0

Effective teaching signifies all of the following except:

ذیل میں دی گئی تمام مؤثر تدریس کی خصوصیات ہیں سوائے

Options :

Encouraging students during class discussion

1. ✔

کلاس روم میں مباحث کے دوران طلباء کی ہمت افزائی کرنا

Teaching with passion

2. ✘

شدید جذبہ شوق سے تدریس کرنا

Maintaining high discipline in the classroom

کلاس روم میں سخت ڈسپلن قائم رکھنا

3. ✖

Using variety of teaching resources

مختلف قسم کے تدریسی ذرائع استعمال کرنا

4. ✖

Question Number : 67 Question Id : 381906671 Question Type : MCQ Option Shuffling : No
Display Question Number : Yes Is Question Mandatory : No Calculator : None Response Time
: N.A Think Time : N.A Minimum Instruction Time : 0

Correct Marks : 1 Wrong Marks : 0

Some of the students repeatedly misbehave with a teacher in the classroom. How will you respond to the problem?

کلاس روم میں چند طلباء بار بار ٹیچر کے ساتھ نازیبا برتاؤ کرتے ہیں تو آپ اس مسئلہ کو کیسے حل کریں گے

Options :

Improve their behaviour by setting an example in good behavior

ایک اچھے برتاؤ کی مثال پیش کرتے ہوئے ان کے برتاؤ کو بہتر بنائیں گے

1. ✔

Deduct marks from their internal assessment score

ان کے انٹرنل اسسمنٹ اسکور سے مارکس کو کم کریں گے

2. ✖

Report to their parents

ان کے والدین کو مطلع کریں گے

3. ✖

Do not allow them to attend your lecture

آپ کے لکچر میں شریک ہونے کی اجازت نہیں دیں گے

4. ✖

Question Number : 68 Question Id : 381906672 Question Type : MCQ Option Shuffling : No
Display Question Number : Yes Is Question Mandatory : No Calculator : None Response Time
: N.A Think Time : N.A Minimum Instruction Time : 0

Correct Marks : 1 Wrong Marks : 0

Use of teaching aids can help teachers make:

ایک ٹیچر کو تدریسی آلات کا استعمال اس طرح مدد کر سکتا ہے

Options :

Lessons seem fancy

1. ✘ اسباق کو فینسی بنا کر

Teaching less burdensome

2. ✘ تدریس کے بوجھ کو کم کر کے

Teaching interesting

3. ✔ تدریس کو دلچسپ بنا کر

Content easy and concrete

4. ✘ مواد متن کو آسان اور مقرون بنا کر

Question Number : 69 Question Id : 381906673 Question Type : MCQ Option Shuffling : No
Display Question Number : Yes Is Question Mandatory : No Calculator : None Response Time
: N.A Think Time : N.A Minimum Instruction Time : 0

Correct Marks : 1 Wrong Marks : 0

A sensitive teacher is always ready to:

ایک حساس ٹیچر ہمیشہ اس بات کے لئے تیار رہتا ہے

Options :

Provide notes to the students

1. ✘ طلبہ کو نوٹس فراہم کرنا

Solve problems of the students

2. ✓

طلبہ کے مسائل حل کرنا

Help the poor students

3. ✘

غریب طلبہ کی مدد کرنا

Help the gifted students

4. ✘

ذہین طلبہ کی مدد کرنا

Question Number : 70 Question Id : 381906674 Question Type : MCQ Option Shuffling : No
Display Question Number : Yes Is Question Mandatory : No Calculator : None Response Time
: N.A Think Time : N.A Minimum Instruction Time : 0

Correct Marks : 1 Wrong Marks : 0

Which of the following qualities is an essential requirement of a successful teacher?

ایک کامیاب استاد کے لئے درج ذیل کون سی خصوصیت نہایت ضروری ہے

Options :

Command over technology

1. ✘

تکنالوجی پر عبور

Command over the language

2. ✘

زبان پر عبور

Command over the students

3. ✘

طلبہ پر اختیار

Command over the subject

مضمون پر عبور

4. ✓

Question Number : 71 Question Id : 381906675 Question Type : MCQ Option Shuffling : No
Display Question Number : Yes Is Question Mandatory : No Calculator : None Response Time
: N.A Think Time : N.A Minimum Instruction Time : 0

Correct Marks : 1 Wrong Marks : 0

As a teacher, you are asked to give your preference for the workload.
What will be your ideal choice?

بجائیت استاد آپ سے کام کے بوجھ کے لئے اپنی ترجیح دینے کے لئے کہا جاتا ہے۔ آپ کا مثالی انتخاب کیا ہوگا؟

Options :

Only teaching classes

1. ✘

صرف کلاس کی تدریس کرنا

Teaching classes and tutorials to students

2. ✓

طلبہ کو کلاسوں اور ٹیوٹریلز کی تدریس کرنا

Fewer teaching classes and more administrative work

3. ✘

کم تدریسی کلاسوں اور زیادہ انتظامی کام

Less teaching classes and more co-curricular responsibilities

4. ✘

کم تدریسی کلاسوں اور زیادہ ہم نصابی ذمہ داریاں

Question Number : 72 Question Id : 381906676 Question Type : MCQ Option Shuffling : No
Display Question Number : Yes Is Question Mandatory : No Calculator : None Response Time
: N.A Think Time : N.A Minimum Instruction Time : 0

Correct Marks : 1 Wrong Marks : 0

A teacher can assess the progress of his / her students by:

ایک استاد اپنے طالب علم کی ترقی کا اندازہ اس طرح لگا سکتا ہے

Options :

Systematically maintaining the record of students' responses and learning behaviours

1. ✓

طلباء کے رد عمل اور اکتسابی برتاؤ کے ریکارڈ کو باقاعدگی سے رکھتے ہوئے

Conducting examinations

2. ✗

امتحانات کا انعقاد کرتے ہوئے

Asking the student to write self-report

3. ✗

طلبہ کو اپنی رپورٹ خود لکھنے کی ہدایت کرتے ہوئے

Asking students to do peer assessment

4. ✗

طلبہ کو اپنے ساتھیوں کا تعین قدر کرنے کی ہدایت دیتے ہوئے

Question Number : 73 Question Id : 381906677 Question Type : MCQ Option Shuffling : No

Display Question Number : Yes Is Question Mandatory : No Calculator : None Response Time

: N.A Think Time : N.A Minimum Instruction Time : 0

Correct Marks : 1 Wrong Marks : 0

The correct indicator of a teacher's competency is:

ایک استاد کی استعداد کا صحیح مظہر

Options :

Result of the students

1. ✓

طلبہ کے نتائج

2. ✗

Degrees and awards

ڈگریاں اور ایوارڈز

Member of academic bodies

تعلیمی اداروں کا رکن

3. ✘

Personality of the teacher

ٹیچر کی شخصیت

4. ✘

Question Number : 74 Question Id : 381906678 Question Type : MCQ Option Shuffling : No
Display Question Number : Yes Is Question Mandatory : No Calculator : None Response Time
: N.A Think Time : N.A Minimum Instruction Time : 0

Correct Marks : 1 Wrong Marks : 0

The role of the teacher is to:

ٹیچر کا رول ہوتا ہے

Options :

Cover the syllabus

نصاب کو پورا کرنا

1. ✘

Discipline the students

طلبہ کا ڈسپلین

2. ✘

Guide the student and facilitate knowledge construction

طلبہ کی رہنمائی کرنا اور علم کی تعمیر میں سہولت فراہم کرنا

3. ✔

Evaluate homework and give grades

ہوم ورک کی جانچ کرنا اور درجات دینا

4. ✘

Question Number : 75 Question Id : 381906679 Question Type : MCQ Option Shuffling : No
Display Question Number : Yes Is Question Mandatory : No Calculator : None Response Time
: N.A Think Time : N.A Minimum Instruction Time : 0

Correct Marks : 1 Wrong Marks : 0

While you are teaching in the classroom, one of your students identifies your mistake and points it out in front of the whole class. How will you react to this?

جب آپ کلاس روم میں درس دے رہے ہیں، طلباء میں سے کوئی ایک پوری کلاس کے سامنے آپ کی غلطی کی نشاندہی کرتا ہے۔ آپ اس پر کس طرح رد عمل ظاہر کریں گے؟

Options :

You will ignore the situation

1. ✘ صورت حال کو نظر انداز کریں گے

You will accept your mistake humbly and thank the student for correcting you

2. ✔ آپ انکساری سے اپنی غلطی کو قبول کریں گے اور طالب علم کا آپ کی اصلاح کرنے کے لئے شکر یہ ادا کریں گے

You will scold the student and charge him with misbehavior in the class

3. ✘ آپ طالب علم کو ڈانٹیں گے اور کلاس میں بد تمیزی کرنے کا الزام لگائیں گے۔

You will step out of the class showing your displeasure

4. ✘ آپ اپنی ناپسندیدگی ظاہر کرتے ہوئے کلاس سے باہر چلے جائیں گے

Question Number : 76 Question Id : 381906680 Question Type : MCQ Option Shuffling : No
Display Question Number : Yes Is Question Mandatory : No Calculator : None Response Time
: N.A Think Time : N.A Minimum Instruction Time : 0

Correct Marks : 1 Wrong Marks : 0

Verbal guidance is least effective while a teacher is teaching about:

زبانی رہنمائی اس وقت کم ترین موثر ہوتی ہے جب آپ اس کے بارے میں درس دے رہے ہوں

Options :

Skills

1. ✓ مہارتیں

Attitudes

2. ✗ رویے

Relationships

3. ✗ ہم رشتگی

Concepts and related facts

4. ✗ تصورات اور متعلقہ حقائق

Question Number : 77 Question Id : 381906681 Question Type : MCQ Option Shuffling : No

Display Question Number : Yes Is Question Mandatory : No Calculator : None Response Time

: N.A Think Time : N.A Minimum Instruction Time : 0

Correct Marks : 1 Wrong Marks : 0

A teacher who is not able to draw the attention of his students should:

وہ ٹیچر جو اپنے طلباء کی توجہ مبذول کروانے کے قابل نہیں ہوتا، اسے چاہیے کہ

Options :

Find fault in his / her students

1. ✗ اپنے طلباء کی خامیوں کو معلوم کرے

2. ✗

Start dictating

حکم چلانا شروع کرنا

Resign from his / her post

3. ✘ اپنے عہدہ سے استعفیٰ دینا

Evaluate his / her teaching method and improve the same

4. ✔ اپنے تدریسی طریقہ کی جانچ کرنا اور اس کو بہتر بنانا۔

Question Number : 78 Question Id : 381906682 Question Type : MCQ Option Shuffling : No
Display Question Number : Yes Is Question Mandatory : No Calculator : None Response Time
: N.A Think Time : N.A Minimum Instruction Time : 0

Correct Marks : 1 Wrong Marks : 0

As a teacher, you will demonstrate your impartial behaviour by:

بجائیت ٹیچر آپ اپنے غیر جانبدانہ برتاؤ کا کسی طرح مظاہرہ کریں گے۔

Options :

Making your own behaviour more balanced and fairer

1. ✔ اپنے خود کے برتاؤ مزید متوازن اور منصفانہ بناتے ہوئے۔

Criticizing the teaching community

2. ✘ تدریسی برادری پر تنقید کرتے ہوئے

Maintain high self-esteem and egoistic behavior

3. ✘ اونچے درجہ کی خود احترامی اور انا پسند برتاؤ اختیار کرتے ہوئے

4. ✘

Assaulting students

طلبہ کو جھڑکتے ہوئے

Question Number : 79 Question Id : 381906683 Question Type : MCQ Option Shuffling : No
Display Question Number : Yes Is Question Mandatory : No Calculator : None Response Time
: N.A Think Time : N.A Minimum Instruction Time : 0

Correct Marks : 1 Wrong Marks : 0

Of the following, the most unreliable predictor of educational achievement is:

درج ذیل میں، کون تعلیمی تحصیل کا غیر بھروسہ مند پیش گو ہے

Options :

Family background and training

1. ✘

خاندانی پس منظر اور تربیت

Classroom experiences

2. ✘

کمرہ جماعت کے تجربات

Ethnic origin of parents

3. ✘

والدین کا نسلی ماخذ

Inherited biological potential for learning

4. ✔

اکتساب کے تئیں موروثی حیاتیاتی صلاحیت

Question Number : 80 Question Id : 381906684 Question Type : MCQ Option Shuffling : No
Display Question Number : Yes Is Question Mandatory : No Calculator : None Response Time
: N.A Think Time : N.A Minimum Instruction Time : 0

Correct Marks : 1 Wrong Marks : 0

You find that a particular instructional strategy is effective in teaching your subject but none of your colleagues agree with you. You will:

آپ اس بات پر غور کرتے ہیں کہ ایک مخصوص تدریسی حکمت عملی آپ کے مضمون کی تدریس کے لئے مؤثر ہے لیکن آپ کے ساتھیوں میں سے کوئی بھی اس سے اتفاق نہیں کرتا۔ آپ کیا کریں گے؟

Options :

Design action research that will prove the efficacy of the appropriate strategy

1. ✓

آپ عملی تحقیق ڈیزائن کریں گے تاکہ مناسب حکمت عملی کی مؤثریت کو ثابت کر سکیں

Agree to disagree

2. ✘

غیر رضامندی کو قبول کریں گے

Give up your strategy as none of the other teachers agree with it

3. ✘

اپنی حکمت عملی کو چھوڑ دیں گے کیونکہ کوئی دوسرا ٹیچر اسکے لئے راضی نہیں ہے

Look for a theoretical justification of the strategy from the books available in the library

4. ✘

لاہیری میں دستیاب کتاب میں سے حکمت عملی کو ثابت کرنے کے لئے کوئی نظریہ کی تلاش کریں گے۔

General English

| | |
|---------------------------------------|-----------|
| Section Id : | 38190623 |
| Section Number : | 3 |
| Section type : | Online |
| Mandatory or Optional : | Mandatory |
| Number of Questions : | 16 |
| Number of Questions to be attempted : | 16 |
| Section Marks : | 20 |

| | |
|---|----------|
| Enable Mark as Answered Mark for Review and Clear Response : | Yes |
| Maximum Instruction Time : | 0 |
| Sub-Section Number : | 1 |
| Sub-Section Id : | 38190627 |
| Question Shuffling Allowed : | No |
| Is Section Default? : | null |

Question Id : 381906685 Question Type : COMPREHENSION Sub Question Shuffling Allowed : No Group Comprehension Questions : No Question Pattern Type : NonMatrix Calculator : None Response Time : N.A Think Time : N.A Minimum Instruction Time : 0

Question Numbers : (81 to 85)

Read the passage carefully and mark the correct answer for the questions

Out of the mouths of Babes

Last Friday I took my wife and my six-year old daughter Sudha to see the TajMahal at Agra. We went by the Taj Express and Sudha was very excited because she had never travelled by train before. She sat near the window and looked at trees and houses flying with shining eyes. At one station a fat woman about 50 years old, came into our compartment and sat facing us.

When the train steamed out of the station, the woman opened her hand bag, took out a lip-stick and began to make up her lips. 'Why are you doing that?' asked Sudha. 'To make my face beautiful', said the woman, frowning. 'But your face is still ugly', said Sudha. You can imagine how embarrassed my wife and I were! We apologized to the woman and told Sudha sternly that she should not be rude to people. Sudha concentrated on the countryside flying past the window and did not look at the woman again.

Sub questions

Question Number : 81 Question Id : 381906686 Question Type : MCQ Option Shuffling : No

Display Question Number : Yes Is Question Mandatory : No Calculator : None Response Time : N.A Think Time : N.A Minimum Instruction Time : 0

Correct Marks : 1 Wrong Marks : 0

How did Sudha, my wife and I go to see the Taj?

Options :

1. ✘ by bus
2. ✔ by train
3. ✘ by car
4. ✘ by aeroplane

Question Number : 82 Question Id : 381906687 Question Type : MCQ Option Shuffling : No

Display Question Number : Yes Is Question Mandatory : No Calculator : None Response Time : N.A Think Time : N.A Minimum Instruction Time : 0

Correct Marks : 1 Wrong Marks : 0

Sudha was excited because:

Options :

1. ✔ this was her first journey by train
2. ✘ she was a very little girl
3. ✘ her parents were with her
4. ✘ they were travelling very fast

Question Number : 83 Question Id : 381906688 Question Type : MCQ Option Shuffling : No
Display Question Number : Yes Is Question Mandatory : No Calculator : None Response Time
: N.A Think Time : N.A Minimum Instruction Time : 0

Correct Marks : 1 Wrong Marks : 0

Where did the fat woman sit?

Options :

1. ✘ sat next to Sudha
2. ✘ sat by the window
3. ✔ sat in the seat opposite
4. ✘ sat in a different coach

Question Number : 84 Question Id : 381906689 Question Type : MCQ Option Shuffling : No
Display Question Number : Yes Is Question Mandatory : No Calculator : None Response Time
: N.A Think Time : N.A Minimum Instruction Time : 0

Correct Marks : 1 Wrong Marks : 0

What did she take out of her hand bag?

Options :

1. ✘ her spectacles
2. ✘ her travel ticket
3. ✘ some money

4. ✓ her lipstick

Question Number : 85 Question Id : 381906690 Question Type : MCQ Option Shuffling : No
Display Question Number : Yes Is Question Mandatory : No Calculator : None Response Time
: N.A Think Time : N.A Minimum Instruction Time : 0

Correct Marks : 1 Wrong Marks : 0

What did Sudha do after she got a scolding?

Options :

1. ✓ she continued looking out of the window

2. ✗ she continued to look at the woman

3. ✗ she started crying like a child

4. ✗ she shouted back at her mother

| | |
|------------------------------|----------|
| Sub-Section Number : | 2 |
| Sub-Section Id : | 38190628 |
| Question Shuffling Allowed : | Yes |
| Is Section Default? : | null |

Question Number : 86 Question Id : 381906691 Question Type : MCQ Option Shuffling : No
Display Question Number : Yes Is Question Mandatory : No Calculator : None Response Time
: N.A Think Time : N.A Minimum Instruction Time : 0

Correct Marks : 1 Wrong Marks : 0

Choose the correct prefix for the word 'logical'

Options :

1. ✗ un-

2. ✘ a-

3. ✔ il-

4. ✘ in-

Question Number : 87 Question Id : 381906692 Question Type : MCQ Option Shuffling : No
Display Question Number : Yes Is Question Mandatory : No Calculator : None Response Time
: N.A Think Time : N.A Minimum Instruction Time : 0

Correct Marks : 1 Wrong Marks : 0

Which of the following words has been spelt correctly?

Options :

1. ✘ connoisurre

2. ✘ conoisuer

3. ✔ connoisseur

4. ✘ connoissure

Question Number : 88 Question Id : 381906693 Question Type : MCQ Option Shuffling : No
Display Question Number : Yes Is Question Mandatory : No Calculator : None Response Time
: N.A Think Time : N.A Minimum Instruction Time : 0

Correct Marks : 1 Wrong Marks : 0

Fill in the blanks with a suitable article;

We go to school every morning. On _____ way we see _____ beautiful house.

Options :

1. ✓ the, a
2. ✗ a, an
3. ✗ an, the
4. ✗ the, an

Question Number : 89 Question Id : 381906694 Question Type : MCQ Option Shuffling : No Display Question Number : Yes Is Question Mandatory : No Calculator : None Response Time : N.A Think Time : N.A Minimum Instruction Time : 0

Correct Marks : 1 Wrong Marks : 0

When I go back home, I find my mother busy in _____ kitchen.

Options :

1. ✗ a
2. ✓ the
3. ✗ an
4. ✗ No article

Question Number : 90 Question Id : 381906695 Question Type : MCQ Option Shuffling : No
Display Question Number : Yes Is Question Mandatory : No Calculator : None Response Time
: N.A Think Time : N.A Minimum Instruction Time : 0

Correct Marks : 1 Wrong Marks : 0

Complete the sentence by choosing a correct preposition.

Ramu looked very tired. He had just come back _____ the gym.

Options :

1. ✘ by

2. ✘ of

3. ✘ to

4. ✔ from

Question Number : 91 Question Id : 381906696 Question Type : MCQ Option Shuffling : No
Display Question Number : Yes Is Question Mandatory : No Calculator : None Response Time
: N.A Think Time : N.A Minimum Instruction Time : 0

Correct Marks : 1 Wrong Marks : 0

Choose the correct synonym for the word underlined.

After lunch, the children were given a bowl of ice-cream.

Options :

1. ✘ sweet

2. ✔ dessert

3. ✘ appetiser

4. ✘ left over

Question Number : 92 Question Id : 381906697 Question Type : MCQ Option Shuffling : No
Display Question Number : Yes Is Question Mandatory : No Calculator : None Response Time
: N.A Think Time : N.A Minimum Instruction Time : 0

Correct Marks : 1 Wrong Marks : 0

Choose the correct antonym for the word underlined.

An elephant is known for being sanguine.

Options :

1. ✔ friendly

2. ✘ wild

3. ✘ dangerous

4. ✘ foolish

Question Number : 93 Question Id : 381906698 Question Type : MCQ Option Shuffling : No
Display Question Number : Yes Is Question Mandatory : No Calculator : None Response Time
: N.A Think Time : N.A Minimum Instruction Time : 0

Correct Marks : 1 Wrong Marks : 0

Fill in the blank with a phrasal verb:

The teacher was angry with the student who was _____ the
window.

Options :

1. ✓ looking out of

2. ✗ looking into

3. ✗ looking for

4. ✗ looking after

Question Number : 94 Question Id : 381906699 Question Type : MCQ Option Shuffling : No Display Question Number : Yes Is Question Mandatory : No Calculator : None Response Time : N.A Think Time : N.A Minimum Instruction Time : 0

Correct Marks : 1 Wrong Marks : 0

Which is the correct passive form of the given sentence?

I bought this book two days ago in the exhibition.

Options :

1. ✗ This book bought two days ago in the exhibition.

2. ✗ Two days ago, I bought this book in the exhibition.

3. ✓ This book was bought by me two days ago in the exhibition.

4. ✗ This book was bought by the exhibition two days ago.

Question Number : 95 Question Id : 381906700 Question Type : MCQ Option Shuffling : No Display Question Number : Yes Is Question Mandatory : No Calculator : None Response Time : N.A Think Time : N.A Minimum Instruction Time : 0

Correct Marks : 1 Wrong Marks : 0

Identify the correct past tense form of the sentence given.

Plants are green when you water them every day.

Options :

1. ✘ Plants are green when you watered them every day.
2. ✔ Plants were green when you watered them every day.
3. ✘ Plants will be green when you water them every day.
4. ✘ Plants have to be green when you water then every day.

Question Number : 96 Question Id : 381906701 Question Type : MCQ Option Shuffling : No Display Question Number : Yes Is Question Mandatory : No Calculator : None Response Time : N.A Think Time : N.A Minimum Instruction Time : 0

Correct Marks : 1 Wrong Marks : 0

Join the two given sentences using a proper conjunction.

- i. The teacher in the class taught the lessons very well.
- ii. The teacher was strict and got angry easily.

Options :

1. ✘ and
2. ✘ also
3. ✘ even

4. ✓ But

Question Number : 97 Question Id : 381906702 Question Type : MCQ Option Shuffling : No
Display Question Number : Yes Is Question Mandatory : No Calculator : None Response Time
: N.A Think Time : N.A Minimum Instruction Time : 0

Correct Marks : 1 Wrong Marks : 0

Add a question tag to the given statement.

He always gets the first rank, he is very intelligent, _____

Options :

1. ✗ isn't it?

2. ✗ doesn't he?

3. ✓ isn't he?

4. ✗ does he?

Question Number : 98 Question Id : 381906703 Question Type : MCQ Option Shuffling : No
Display Question Number : Yes Is Question Mandatory : No Calculator : None Response Time
: N.A Think Time : N.A Minimum Instruction Time : 0

Correct Marks : 1 Wrong Marks : 0

Which word has the same meaning as the following sentence? Fill in the blank with an appropriate phrase to complete the sentence.

My teacher has written and published many stories. He/She is _____

Options :

1. ✓ an author

2. ✘ a story teller

3. ✘ a writer

4. ✘ an intelligent person

**Question Number : 99 Question Id : 381906704 Question Type : MCQ Option Shuffling : No
Display Question Number : Yes Is Question Mandatory : No Calculator : None Response Time
: N.A Think Time : N.A Minimum Instruction Time : 0**

Correct Marks : 1 Wrong Marks : 0

Which of the following sentences is correct?

Options :

1. ✘ There are a book on my table

2. ✘ There are book on my table

3. ✘ There books are on my table

4. ✔ There are books on my table

**Question Number : 100 Question Id : 381906705 Question Type : MCQ Option Shuffling : No
Display Question Number : Yes Is Question Mandatory : No Calculator : None Response Time
: N.A Think Time : N.A Minimum Instruction Time : 0**

Correct Marks : 1 Wrong Marks : 0

Here are four sentences a, b, c, and d. Put them in order to make a paragraph. The possible orders are suggested below.

1. The doctor gave me an injection.
2. I could not get up from the bed.
3. My mother took me to a doctor.
4. The doctor saw I had high fever.

Options :

1. ✘ a,b,c,d

2. ✔ b, c, d, a

3. ✘ c, b, a, d

4. ✘ d, a, b, c

General Knowledge and Educational Issues

| | |
|---|-----------|
| Section Id : | 38190624 |
| Section Number : | 4 |
| Section type : | Online |
| Mandatory or Optional : | Mandatory |
| Number of Questions : | 30 |
| Number of Questions to be attempted : | 30 |
| Section Marks : | 30 |
| Enable Mark as Answered Mark for Review and Clear Response : | Yes |
| Maximum Instruction Time : | 0 |
| Sub-Section Number : | 1 |

Sub-Section Id :

38190629

Question Shuffling Allowed :

Yes

Is Section Default? :

null

Question Number : 101 Question Id : 381906706 Question Type : MCQ Option Shuffling : No
Display Question Number : Yes Is Question Mandatory : No Calculator : None Response Time
: N.A Think Time : N.A Minimum Instruction Time : 0

Correct Marks : 1 Wrong Marks : 0

Bhagath Singh was executed into which of the following cases

بھگت سنگھ کو درج ذیل کس کیس کے سلسلے میں پھانسی دی گئی؟

Options :

Lahore conspiracy case

1. ✓

لاہور سازش کیس

Central Assembly Bomb case

2. ✘

سنٹرل اسمبلی بم کیس

Kakori case

3. ✘

کاکوری کیس

Dalhousie square Bomb case

4. ✘

ڈلہوزی اسکوائر بم کیس

Question Number : 102 Question Id : 381906707 Question Type : MCQ Option Shuffling : No
Display Question Number : Yes Is Question Mandatory : No Calculator : None Response Time
: N.A Think Time : N.A Minimum Instruction Time : 0

Correct Marks : 1 Wrong Marks : 0

Which king has started the organization of “Kumbh Fair” at Allahabad?

”کبھ میلہ“ کو کس بادشاہ نے شروع کیا؟

Options :

Harshavardhana

1. ✓ ہرش وردھن

Dhruwasana II

2. ✘ دھروواسنا دوم

Narasimha Varman

3. ✘ نرسمہاورمن

Akbar

4. ✘ اکبر

Question Number : 103 Question Id : 381906708 Question Type : MCQ Option Shuffling : No
Display Question Number : Yes Is Question Mandatory : No Calculator : None Response Time
: N.A Think Time : N.A Minimum Instruction Time : 0

Correct Marks : 1 Wrong Marks : 0

“Upanishads” are books on

”پنیشد“ اس موضوع پر لکھی گئی کتابیں

Options :

Politics

1. ✘ سیاست

Philosophy

2. ✓ فلسفہ

Medicine

3. ✘ طب

Social life

4. ✘ سماجی زندگی

Question Number : 104 Question Id : 381906709 Question Type : MCQ Option Shuffling : No
Display Question Number : Yes Is Question Mandatory : No Calculator : None Response Time
: N.A Think Time : N.A Minimum Instruction Time : 0

Correct Marks : 1 Wrong Marks : 0

“ Pankaj udhas” who passed away recently associated with which filed

حال ہی میں انتقال کر گئے پنکج ادھاس کا تعلق کس میدان سے تھا؟

Options :

Politics

1. ✘ سیاست

Sports

2. ✘ اسپورٹس

Singing

3. ✔ گائیگی

Science

4. ✘ سائنس

Question Number : 105 Question Id : 381906710 Question Type : MCQ Option Shuffling : No
Display Question Number : Yes Is Question Mandatory : No Calculator : None Response Time
: N.A Think Time : N.A Minimum Instruction Time : 0

Correct Marks : 1 Wrong Marks : 0

What is the theme of “World NGO Day 2024”?

وُلڈ NGO ڈے 2024 کا عنوان کیا ہے

Options :

1. ✓ Building a sustainable future : The role of NGOs in Achieving the SDGS
2. ✘ Building a more equitable world
3. ✘ Empowering Communities for Sustainable Development
4. ✘ Celebrating Community Heroes

Question Number : 106 Question Id : 381906711 Question Type : MCQ Option Shuffling : No
Display Question Number : Yes Is Question Mandatory : No Calculator : None Response Time
: N.A Think Time : N.A Minimum Instruction Time : 0

Correct Marks : 1 Wrong Marks : 0

Recently, which Institute has launched the “India’s largest Drone Pilot Training Organization” ?

حالیہ عرصہ میں کون سے ادارہ نے انڈیا کے سب سے بڑے ”ڈرون پائلٹ ٹریننگ آرگنائزیشن“ کو شروع کیا

Options :

1. ✘ IIT Bombay
IIT باہے
2. ✓ IIT Guwahati
IIT گوہاتی

IIT Roorkey

3. ✘ IIT روڑکی

IIT Kanpur

4. ✘ IIT کانپور

Question Number : 107 Question Id : 381906712 Question Type : MCQ Option Shuffling : No
Display Question Number : Yes Is Question Mandatory : No Calculator : None Response Time
: N.A Think Time : N.A Minimum Instruction Time : 0

Correct Marks : 1 Wrong Marks : 0

“Digital Detox” Initiative recently seen in the news is associated with which state

حالیہ عرصہ میں اخبارات میں دیکھے جانے والے ”ڈیجیٹل ڈیٹاکس“ کا تعلق کس ریاست سے ہے؟

Options :

Kerala

1. ✘ کیرالا

Karnataka

2. ✔ کرناٹک

Rajasthan

3. ✘ راجستھان

Maharashtra

4. ✘ مہاراشٹرا

Question Number : 108 Question Id : 381906713 Question Type : MCQ Option Shuffling : No
Display Question Number : Yes Is Question Mandatory : No Calculator : None Response Time
: N.A Think Time : N.A Minimum Instruction Time : 0

Correct Marks : 1 Wrong Marks : 0

General Dong Jung, who was recently in news is the defence Minister of which country?

حالیہ عرصہ میں خبروں میں رہنے والے جنرل ڈانگ جنگ کس ملک کے وزیر دفاع ہیں

Options :

China

1. ✓ چین

Taiwan

2. ✘ تائیوان

South Korea

3. ✘ جنوبی کوریا

North Korea

4. ✘ شمالی کوریا

Question Number : 109 Question Id : 381906714 Question Type : MCQ Option Shuffling : No
Display Question Number : Yes Is Question Mandatory : No Calculator : None Response Time
: N.A Think Time : N.A Minimum Instruction Time : 0

Correct Marks : 1 Wrong Marks : 0

“ Global Waste Management Outlook 2024” recently seen in news is published by which one of the following organization

حالیہ دنوں خبروں میں دیکھی جانے والی ”گلوبل ویسٹ مینجمنٹ آؤٹ لک 2024“ کو کس آرگنائزیشن نے شائع کیا

Options :

1.

✓ UNEP

2. ✗ UNDP

3. ✗ UNESCO

4. ✗ IMF

Question Number : 110 Question Id : 381906715 Question Type : MCQ Option Shuffling : No
Display Question Number : Yes Is Question Mandatory : No Calculator : None Response Time
: N.A Think Time : N.A Minimum Instruction Time : 0

Correct Marks : 1 Wrong Marks : 0

Recently which South American country has declared a health emergency due to the rising of Dengue Fever”?

ڈینگو بخار کے بڑھتے کیسوں کی وجہ سے حالیہ عرصہ میں کس جنوبی امریکہ کے ملک نے ہیلتھ ایمرجنسی کا اعلان کیا

Options :

Chile

1. ✗ چلی

Peru

2. ✓ پیرو

Argentina

3. ✗ ارجنٹائن

Bolivia

4. ✗ بولیویا

Question Number : 111 Question Id : 381906716 Question Type : MCQ Option Shuffling : No
Display Question Number : Yes Is Question Mandatory : No Calculator : None Response Time
: N.A Think Time : N.A Minimum Instruction Time : 0

Correct Marks : 1 Wrong Marks : 0

“Vantara” initiative recently seen in the news, is associated with which of the following?

حالیہ عرصہ میں نیوز میں دیکھے جانے والے ”ون تارا“ پروگرام کا تعلق درج ذیل کس سے ہے

Options :

Animal welfare

1. ✘ جانوروں کی بھلائی

Climate change

2. ✔ موسم کی تبدیلی

Environmental protection

3. ✘ ماحولیاتی تحفظ

Historical monuments

4. ✘ تاریخی عمارات

Question Number : 112 Question Id : 381906717 Question Type : MCQ Option Shuffling : No
Display Question Number : Yes Is Question Mandatory : No Calculator : None Response Time
: N.A Think Time : N.A Minimum Instruction Time : 0

Correct Marks : 1 Wrong Marks : 0

Which Institution constituted a taskforce to examine the impact of Digital personal Data protection Act on Insurance Sector

انشورنس سیکٹر پر ڈیجیٹل پرائیویسیٹی ایکٹ کے اثر کا جائزہ لینے کے لئے کس ادارہ نے ناسک فورس تشکیل دی۔

Options :

Ministry of Electronics & IT

منسٹری آف الیکٹرانکس اینڈ آئی ٹی

1. ✘

2. ✔

IRDAI

3. ✘

RBI

4. ✘

SEBI

Question Number : 113 Question Id : 381906718 Question Type : MCQ Option Shuffling : No
Display Question Number : Yes Is Question Mandatory : No Calculator : None Response Time
: N.A Think Time : N.A Minimum Instruction Time : 0

Correct Marks : 1 Wrong Marks : 0

Funds raised through “Social Bonds on Bombay Stock Exchange” as listed in NABARD would be used to reference in which one of the following scheme?

NABARD میں درج ”سوشیل بانڈرز آن بمبے اسٹاک ایکسچینج“ کے ذریعے اکٹھا کئے گئے فنڈز کو درج ذیل کس کے حوالے کے طور پر استعمال کیا جائے گا؟

Options :

PMAY

1. ✘

پی ایم اے وائی

PM SVANidhi

2. ✘

پی ایم ایس واندھی

Jal Jeevan Mission

3. ✔

جے جیون مشن

PMGSY

4. ✖ نییم جی ایس وائی

Question Number : 114 Question Id : 381906719 Question Type : MCQ Option Shuffling : No
Display Question Number : Yes Is Question Mandatory : No Calculator : None Response Time
: N.A Think Time : N.A Minimum Instruction Time : 0

Correct Marks : 1 Wrong Marks : 0

Which region of India is richest in Iron & Coal deposits?

لوہے اور کوئلہ کے ذخائر کے لئے ہندوستان کا کون سا علاقہ مشہور ہے؟

Options :

Thar Desert

1. ✖ تھار ریگستان

The Southern region

2. ✖ جنوبی علاقہ

Himalayan region

3. ✖ ہمالیائی علاقہ

Chota Nagpur plateau

4. ✔ چھوٹا ناگپور سطح مرتفع

Question Number : 115 Question Id : 381906720 Question Type : MCQ Option Shuffling : No
Display Question Number : Yes Is Question Mandatory : No Calculator : None Response Time
: N.A Think Time : N.A Minimum Instruction Time : 0

Correct Marks : 1 Wrong Marks : 0

Bihu Naas is a dance form prevalently practiced in which State?

بیہو ناس، رقص جو بہت زیادہ کیا جاتا ہے۔ کس علاقہ کا ہے؟

Options :

West Bengal

1. ✘ مغربی بنگال

Bihar

2. ✘ بہار

Assam

3. ✔ آسام

Karnataka

4. ✘ کرناٹک

Question Number : 116 Question Id : 381906721 Question Type : MCQ Option Shuffling : No
Display Question Number : Yes Is Question Mandatory : No Calculator : None Response Time
: N.A Think Time : N.A Minimum Instruction Time : 0

Correct Marks : 1 Wrong Marks : 0

To create scientific temperament, initiative amongst the Indian students, Central Government has started ATL Lab. What is the full form of ATL?

ہندوستانی طلباء میں سائنسی مزاج کی تخلیق کرنے کے لئے، حکومت ہند نے ATL لیاب قائم کیا

Options :

1. ✘ Applied Techno Lab

2. ✔ Atal Tinkering Lab

3.

✖ Alternate Technique Lab

4. ✖ Atal Technology Lab

Question Number : 117 Question Id : 381906722 Question Type : MCQ Option Shuffling : No
Display Question Number : Yes Is Question Mandatory : No Calculator : None Response Time
: N.A Think Time : N.A Minimum Instruction Time : 0

Correct Marks : 1 Wrong Marks : 0

First cyber law which provides the Legal infrastructure for e – commerce in India is

ہندوستان میں پہلا سائبر قانون جو ای کامرس کے لئے قانونی انفراسٹرکچر فراہم کرتا ہے

Options :

The information technology Act, 1996

1. ✖

انفارمیشن ٹکنالوجی ایکٹ 1996

The Information Technology Act, 2000

2. ✓

انفارمیشن ٹکنالوجی ایکٹ 2000

The Information Technology Act, 1998

3. ✖

انفارمیشن ٹکنالوجی ایکٹ 1998

The Information Technology Act, 1990

4. ✖

انفارمیشن ٹکنالوجی ایکٹ 1990

Question Number : 118 Question Id : 381906723 Question Type : MCQ Option Shuffling : No
Display Question Number : Yes Is Question Mandatory : No Calculator : None Response Time
: N.A Think Time : N.A Minimum Instruction Time : 0

Correct Marks : 1 Wrong Marks : 0

Which state is set to host the “Mahakumbh 2025” event?

2025 کا مہاکبھ میلا کی کون سی ریاست میزبانی کرے گا؟

Options :

Uttar Pradesh

1. ✓ اتر پردیش

Karnataka

2. ✘ کرناٹک

Odisha

3. ✘ اڈیشہ

West Bengal

4. ✘ مغربی بنگال

Question Number : 119 Question Id : 381906724 Question Type : MCQ Option Shuffling : No
Display Question Number : Yes Is Question Mandatory : No Calculator : None Response Time
: N.A Think Time : N.A Minimum Instruction Time : 0

Correct Marks : 1 Wrong Marks : 0

Bhopal gas tragedy is associated with the leakage of

بھوپال گیس سانحہ کا تعلق کس گیس کے اخراج سے ہے؟

Options :

Carbon dioxide

1. ✘ کاربن ڈائی آکسائیڈ

Nitrogen dioxide

2. ✘ نائٹروجن ڈائی آکسائیڈ

Sulphur dioxide

3. ✘ سلفر ڈائی آکسائیڈ

Methyl Isocyanate

4. ✔ میتھائل آکسوسیائیٹ

Question Number : 120 Question Id : 381906725 Question Type : MCQ Option Shuffling : No
Display Question Number : Yes Is Question Mandatory : No Calculator : None Response Time
: N.A Think Time : N.A Minimum Instruction Time : 0

Correct Marks : 1 Wrong Marks : 0

Which Sate has launched “Indias First Village Atlas”?

کس ریاست نے ”انڈیا فرسٹ ویلج اٹلس“ لانچ کیا؟

Options :

Rajasthan

1. ✘ راجستھان

Goa

2. ✔ گوا

Jharkhand

3. ✘ جھارکھنڈ

Chattisgarh

4. ✘ چھتیس گڑھ

Question Number : 121 Question Id : 381906726 Question Type : MCQ Option Shuffling : No
Display Question Number : Yes Is Question Mandatory : No Calculator : None Response Time
: N.A Think Time : N.A Minimum Instruction Time : 0

Correct Marks : 1 Wrong Marks : 0

Which ministries and departments are involved in 'PM Gati Shakti National Master Plan'?

پی ایم گتی شکتی قومی ماسٹر پلان میں کونسی وزارتیں اور محکمہ جات شامل ہیں؟

Options :

Railways and Roadways

1. ✘ ریلوے اور سڑکیں

Civil Aviation and Shipping

2. ✘ شہری ہوا بازی اور شپنگ

Railways, Civil Aviation, MEITY, Shipping, and Road Transport

3. ✔ ریلوے، شہری ہوا بازی، MEITY، شپنگ اور روڈ ٹرانسپورٹ

Railways, Roadways, and Civil Aviation

4. ✘ ریلوے، سڑکیں اور شہری ہوا بازی

Question Number : 122 Question Id : 381906727 Question Type : MCQ Option Shuffling : No
Display Question Number : Yes Is Question Mandatory : No Calculator : None Response Time
: N.A Think Time : N.A Minimum Instruction Time : 0

Correct Marks : 1 Wrong Marks : 0

The Indian state is known for its traditional dance form called "Perini"?

ذیل میں کونسی ریاست اپنے مخصوص روایتی رقص "پرینی Perini" کے لئے جانا جاتا ہے؟

Options :

1. ✘

Tamil Nadu

تامل ناڈو

Kerala

2. ✘ کیرالا

Karnataka

3. ✘ کرناٹک

Telangana

4. ✔ تلانگانہ

Question Number : 123 Question Id : 381906728 Question Type : MCQ Option Shuffling : No
Display Question Number : Yes Is Question Mandatory : No Calculator : None Response Time
: N.A Think Time : N.A Minimum Instruction Time : 0

Correct Marks : 1 Wrong Marks : 0

Which policy proposed the establishment of PARAKH?

PARAKH کے قیام کے لئے کون سی پالیسی نے تجویز پیش کی؟

Options :

New Education Policy, 2020

1. ✔ نئی تعلیمی پالیسی 2020

National Assessment Policy, 2019

2. ✘ نیشنل اسیسمنٹ پالیسی 2019

Educational Reform Policy, 2021

3. ✘ ایجوکیشنل ریفرم پالیسی 2021

Holistic Development Policy, 2018

ہولسٹک ڈولپمنٹ پالیسی 2018

4. ✖

Question Number : 124 Question Id : 381906729 Question Type : MCQ Option Shuffling : No
Display Question Number : Yes Is Question Mandatory : No Calculator : None Response Time : N.A Think Time : N.A Minimum Instruction Time : 0

Correct Marks : 1 Wrong Marks : 0

Who plays the central role in enacting holistic teaching methods?

جامع تدریس کے طریقوں پر عمل کرنے میں کون سب سے مرکزی رول ادا کرتا ہے؟

Options :

Friends

1. ✖ دوست

Classmates

2. ✖ ہم جماعت ساتھی

Teachers

3. ✓ اساتذہ

Parents

4. ✖ والدین

Question Number : 125 Question Id : 381906730 Question Type : MCQ Option Shuffling : No
Display Question Number : Yes Is Question Mandatory : No Calculator : None Response Time : N.A Think Time : N.A Minimum Instruction Time : 0

Correct Marks : 1 Wrong Marks : 0

What is the purpose of learning objectives in a lesson?

سبق میں اکتسابی مقاصد کا کیا مقصد ہوتا ہے؟

Options :

To outline what students should be able to do or know by the end of the lesson

1. ✓

سبق کے اختتام پر طلباء کو کس ہنر کے قابل ہونا چاہئے یا کیا جاننا چاہئے اس کا خاکہ تیار کرنا

To promote competition among students

2. ✘

طلباء میں مسابقت کو فروغ دینا

To focus solely on academic achievements

3. ✘

تعلیمی کامیابیوں پر ہی توجہ مرکوز کرنا

To guide the planning and instruction of the lesson

4. ✘

سبق کی منصوبہ بندی اور تدریس کی رہنمائی کرنا

Question Number : 126 Question Id : 381906731 Question Type : MCQ Option Shuffling : No
Display Question Number : Yes Is Question Mandatory : No Calculator : None Response Time : N.A Think Time : N.A Minimum Instruction Time : 0

Correct Marks : 1 Wrong Marks : 0

According to NEP 2020, what is the new curricular structure that replaces the current 10+2+3 system?

NEP 2020 کے مطابق کون سی نصابی ساخت موجودہ رائج 10+2+3 نظام کو بدل دے گی

Options :

1. ✘ 3+4+4+5

2. ✓ 5+3+3+4

3. ✖ $4+3+3+5$

4. ✖ $5+4+3+3$

Question Number : 127 Question Id : 381906732 Question Type : MCQ Option Shuffling : No
Display Question Number : Yes Is Question Mandatory : No Calculator : None Response Time
: N.A Think Time : N.A Minimum Instruction Time : 0

Correct Marks : 1 Wrong Marks : 0

Which of the following is **not** a reason for the socio-economic disadvantage faced by marginalized communities in India?

ہندوستان کی حاشیہ بردار طبقوں کو درپیش سماجی و معاشی مشکلات کا درجہ ذیل کون سا سبب نہیں ہے؟

Options :

Caste-based discrimination

1. ✖ ذات پر مبنی تعصب پرستی

Lack of access to quality education

2. ✖ معیاری تعلیم تک رسائی کا فقدان

Limited economic opportunities

3. ✖ محدود معاشی مواقع

Availability of social welfare programs

4. ✔ سماجی بھلائی کے پروگراموں کی دستیابی

Question Number : 128 Question Id : 381906733 Question Type : MCQ Option Shuffling : No
Display Question Number : Yes Is Question Mandatory : No Calculator : None Response Time

: N.A Think Time : N.A Minimum Instruction Time : 0

Correct Marks : 1 Wrong Marks : 0

The article of the Indian Constitution prohibits discrimination on the grounds of religion, race, caste, sex, or place of birth?

کون سا ہندوستانی دستور مذہب، نسل، جنس، ذات اور مقام پیدائش کے لحاظ سے امتیاز کو ممنوع قرار دیتا ہے

Options :

Article 14

1. ✓ دفعہ 14

Article 19

2. ✗ دفعہ 19

Article 21

3. ✗ دفعہ 21

Article 24

4. ✗ دفعہ 24

Question Number : 129 Question Id : 381906734 Question Type : MCQ Option Shuffling : No
Display Question Number : Yes Is Question Mandatory : No Calculator : None Response Time
: N.A Think Time : N.A Minimum Instruction Time : 0

Correct Marks : 1 Wrong Marks : 0

The amendment of the Indian Constitution introduced the 'Right to Education' as a Fundamental Right?

دستور کی کس ترمیم نے حق برائے تعلیم کو ایک بنیادی حق کے طور پر متعارف کیا؟

Options :

86th Amendment

1. ✓ 86 ویں ترمیم

92nd Amendment

2. ✘ 92 ویں ترمیم

97th Amendment

3. ✘ 97 ویں ترمیم

104th Amendment

4. ✘ 104 ویں ترمیم

Question Number : 130 Question Id : 381906735 Question Type : MCQ Option Shuffling : No
Display Question Number : Yes Is Question Mandatory : No Calculator : None Response Time
: N.A Think Time : N.A Minimum Instruction Time : 0

Correct Marks : 1 Wrong Marks : 0

This Government body is responsible for monitoring the implementation of the Samagra Shiksha Abhiyan program?

سمگرا شیکشا ابھیان پروگرام کے نفاذ کی نگرانی کی ذمہ داری کس حکومتی ادارے کو دی گئی

Options :

Ministry of Education

1. ✔ وزارت تعلیم

National Human Rights Commission

2. ✘ نیشنل ہیومن رائٹس کمیشن

National Council of Educational Research and Training

3. ✘ قومی کونسل برائے تعلیمی تحقیق و تربیت

4. ✖

Computer Awareness

| | |
|--|-----------|
| Section Id : | 38190625 |
| Section Number : | 5 |
| Section type : | Online |
| Mandatory or Optional : | Mandatory |
| Number of Questions : | 20 |
| Number of Questions to be attempted : | 20 |
| Section Marks : | 20 |
| Enable Mark as Answered Mark for Review and Clear Response : | Yes |
| Maximum Instruction Time : | 0 |
| Sub-Section Number : | 1 |
| Sub-Section Id : | 38190630 |
| Question Shuffling Allowed : | Yes |
| Is Section Default? : | null |

Question Number : 131 Question Id : 381906736 Question Type : MCQ Option Shuffling : No
Display Question Number : Yes Is Question Mandatory : No Calculator : None Response Time : N.A Think Time : N.A Minimum Instruction Time : 0

Correct Marks : 1 Wrong Marks : 0

A computer converts data into this.

ایک کمپیوٹر ڈاتا کو اس میں تبدیل کرتا ہے

Options :

1. ✖

Charts

چارٹس

Information

2. ✓ انفارمیشن

Input / output

3. ✘ ان پٹ / آؤٹ پٹ

Software

4. ✘ سافٹ ویئر

Question Number : 132 Question Id : 381906737 Question Type : MCQ Option Shuffling : No
Display Question Number : Yes Is Question Mandatory : No Calculator : None Response Time
: N.A Think Time : N.A Minimum Instruction Time : 0

Correct Marks : 1 Wrong Marks : 0

Which type of software would you use to make the computer perform a specific task, such as writing a letter or drawing a picture?

کمپیوٹر میں ایک مخصوص کام انجام دینے جیسے خط لکھنے یا ایک تصویر اتارنے کے لئے آپ کس قسم کے سافٹ ویئر کا استعمال کریں گے

Options :

Utility software

1. ✘ یوٹی لٹی سافٹ ویئر

Operating system software

2. ✘ آپریٹنگ سسٹم سافٹ ویئر

3. ✘

System software

سسٹم سافٹ ویئر

Application software

اپلی کیشن سافٹ ویئر

4. ✓

Question Number : 133 Question Id : 381906738 Question Type : MCQ Option Shuffling : No
Display Question Number : Yes Is Question Mandatory : No Calculator : None Response Time
: N.A Think Time : N.A Minimum Instruction Time : 0

Correct Marks : 1 Wrong Marks : 0

In most programs, you can press this key to get help.

بیش تر پروگراموں میں آپ اس key کو مدد کے لئے دبا سکتے ہیں

Options :

1. ✗ Alt

2. ✗ Esc

3. ✓ F₁

4. ✗ F₁₀

Question Number : 134 Question Id : 381906739 Question Type : MCQ Option Shuffling : No
Display Question Number : Yes Is Question Mandatory : No Calculator : None Response Time
: N.A Think Time : N.A Minimum Instruction Time : 0

Correct Marks : 1 Wrong Marks : 0

To use a microphone for input, you must install a _____ on your computer.

ان پٹ کے لئے مائکروفون استعمال کرنے کے لئے آپ کو اپنے کمپیوٹر پر _____ ڈالنا ہوگا

Options :

Acoustic card

1. ✘ اکوسٹک کارڈ

Sound card

2. ✔ ساؤنڈ کارڈ

Audio card

3. ✘ آڈیو کارڈ

Aural cord

4. ✘ آرل کارڈ

Question Number : 135 Question Id : 381906740 Question Type : MCQ Option Shuffling : No
Display Question Number : Yes Is Question Mandatory : No Calculator : None Response Time : N.A Think Time : N.A Minimum Instruction Time : 0

Correct Marks : 1 Wrong Marks : 0

Resolution is determined by the computer's _____ .

ریزولوشن کمپیوٹر کے _____ کے ذریعہ تعین کیا جاتا ہے

Options :

Video controller

1. ✔ ویڈیو کنٹرولر

CPU

2. ✘ سی پی یو

System unit

3. ✖ سسٹم یونٹ

Monitor

4. ✖ مانیٹر

Question Number : 136 Question Id : 381906741 Question Type : MCQ Option Shuffling : No
Display Question Number : Yes Is Question Mandatory : No Calculator : None Response Time
: N.A Think Time : N.A Minimum Instruction Time : 0

Correct Marks : 1 Wrong Marks : 0

Laser printers use heat and pressure to bind the tiny particles of a
_____ to paper.

لیزر پرنٹر _____ کے چھوٹے ذرات کو کاغذ سے باندھے کے لئے گرمی اور پریشر کا استعمال کرتے ہیں

Options :

Ink

1. ✖ سیاہی

Toner

2. ✓ ٹونر

Wax

3. ✖ ویکس

Dye

4. ✖ ڈائی

Question Number : 137 Question Id : 381906742 Question Type : MCQ Option Shuffling : No
Display Question Number : Yes Is Question Mandatory : No Calculator : None Response Time
: N.A Think Time : N.A Minimum Instruction Time : 0

Correct Marks : 1 Wrong Marks : 0

A computer's CPU consists of millions of tiny switches called

_____.

کمپیوٹر کے CPU میں کئی ملین نہایت چھوٹے سوچ بچ ہوتے ہیں جنہیں _____ کہتے ہیں

Options :

Transistors

1. ✓ ٹرانسسٹر

Registers

2. ✘ رجسٹرز

Bits

3. ✘ بیٹس

Bytes

4. ✘ بائٹس

Question Number : 138 Question Id : 381906743 Question Type : MCQ Option Shuffling : No
Display Question Number : Yes Is Question Mandatory : No Calculator : None Response Time
: N.A Think Time : N.A Minimum Instruction Time : 0

Correct Marks : 1 Wrong Marks : 0

A list of command choices in an operating system or application is called a _____.

کسی اپلی کیشن آپریٹنگ سسٹم کے کمانڈ چوائس کی فہرست کو _____ کہتے ہیں

Options :

1. ✘

Check box

چیک بکس

Drop-down list

2. ✘ ڈراپ ڈاؤن لسٹ

Menu

3. ✔ مینو

Command line

4. ✘ کمانڈ لائن

Question Number : 139 Question Id : 381906744 Question Type : MCQ Option Shuffling : No
Display Question Number : Yes Is Question Mandatory : No Calculator : None Response Time
: N.A Think Time : N.A Minimum Instruction Time : 0

Correct Marks : 1 Wrong Marks : 0

The hypertext transfer protocol uses Internet addresses in a special format, called a _____ Resource Locator.

ہائپر ٹیکسٹ ٹرانسفر پروٹوکول انٹرنیٹ کے ایڈریس کا استعمال ایک مخصوص فارمٹ میں کرتا ہے جسے _____ ریپورس لوکیٹر کہتے ہیں

Options :

United

1. ✘ یونائیٹڈ

Uniform

2. ✔ یونیفارم

Unvarying

3. ✘ ان ویراننگ

Unified

4. ✘ یونی فائڈ

Question Number : 140 Question Id : 381906745 Question Type : MCQ Option Shuffling : No
Display Question Number : Yes Is Question Mandatory : No Calculator : None Response Time
: N.A Think Time : N.A Minimum Instruction Time : 0

Correct Marks : 1 Wrong Marks : 0

The Internet tool which is used to copy files from one computer to another is known as _____ .

انٹرنیٹ کا وہ ٹول جو ایک کمپیوٹر سے دوسرے کمپیوٹر کو فائلز کاپی کرنے کے لئے استعمال ہوتا ہے

Options :

1. ✘ SMTP

2. ✔ FTP

3. ✘ TCP

4. ✘ ITP

Question Number : 141 Question Id : 381906746 Question Type : MCQ Option Shuffling : No
Display Question Number : Yes Is Question Mandatory : No Calculator : None Response Time
: N.A Think Time : N.A Minimum Instruction Time : 0

Correct Marks : 1 Wrong Marks : 0

_____ is the generic name given for the station that is installed, when an organization contracts with an ISP.

جب کوئی آگنائزیشن ISP سے رجوع ہوتا ہے جو اس اسٹیشن کو جو انسٹال کیا جاتا ہے اسکا جزک نام ہے۔۔۔۔۔

Options :

1. ✘ TASV

2. ✔ VSAT

3. ✘ ASTV

4. ✘ SATV

Question Number : 142 Question Id : 381906747 Question Type : MCQ Option Shuffling : No Display Question Number : Yes Is Question Mandatory : No Calculator : None Response Time : N.A Think Time : N.A Minimum Instruction Time : 0

Correct Marks : 1 Wrong Marks : 0

In MS-Word, if you wish to replace original text with new text, you use the following shortcut for Replace function:

یہ ایس ورڈ میں، اگر آپ اور یجنل ٹکسٹ کو نئے ٹکسٹ سے تبدیل کرنا چاہیں تو آپ ری پلیس فنکشن کے لئے درج ذیل شارٹ کٹ استعمال کریں گے

Options :

1. ✘ Ctrl + R

2. ✘ Ctrl + F

3. ✔ Ctrl + H

4. ✘ Ctrl + S

Question Number : 143 Question Id : 381906748 Question Type : MCQ Option Shuffling : No
Display Question Number : Yes Is Question Mandatory : No Calculator : None Response Time
: N.A Think Time : N.A Minimum Instruction Time : 0

Correct Marks : 1 Wrong Marks : 0

To create a chart in a slide, you enter data in a separate window called as _____ .

سلائیڈ میں چارٹ کرنیٹ کرنے کے لئے آپ ایک علیحدہ ونڈو میں ڈاٹا ڈالتے ہیں جسے _____ کہتے ہیں

Options :

spreadsheet

1. ✘ اسپریڈ شیٹ

rapsheet

2. ✘ راپ شیٹ

worksheet

3. ✘ ورک شیٹ

datasheet

4. ✔ ڈاٹا شیٹ

Question Number : 144 Question Id : 381906749 Question Type : MCQ Option Shuffling : No
Display Question Number : Yes Is Question Mandatory : No Calculator : None Response Time
: N.A Think Time : N.A Minimum Instruction Time : 0

Correct Marks : 1 Wrong Marks : 0

Spreadsheets work with four basic kinds of data labels, numbers, date and

اسپریڈ شیٹس چار قسم کے ڈاٹا لیبلس، نمبرز، تاریخ اور _____ کے ساتھ کام کرتی ہیں

Options :

Logical

1. ✘ لوجیکل

formula

2. ✔ فارمولہ

image

3. ✘ امیج

Boolean

4. ✘ بولین

Question Number : 145 Question Id : 381906750 Question Type : MCQ Option Shuffling : No
Display Question Number : Yes Is Question Mandatory : No Calculator : None Response Time
: N.A Think Time : N.A Minimum Instruction Time : 0

Correct Marks : 1 Wrong Marks : 0

A _____ can convert a printed image into digital format.

_____ ایک پرنٹڈ امیج کو ڈیجیٹل امیج میں بدل سکتا ہے

Options :

digital camera

1. ✘ ڈیجیٹل کیمرہ

photocopier

2. ✘ فوٹو کاپیئر

computer

3. ✘ کمپیوٹر

scanner

4. ✓ اسکاز

Question Number : 146 Question Id : 381906751 Question Type : MCQ Option Shuffling : No
Display Question Number : Yes Is Question Mandatory : No Calculator : None Response Time
: N.A Think Time : N.A Minimum Instruction Time : 0

Correct Marks : 1 Wrong Marks : 0

GIF images are often found on WWW pages, they contain only
_____ or fewer colors.

GIF میجس اکثر WWW صفحات پر پائی جاتی ہیں۔ وہ محض۔۔۔۔ یا کم رنگوں کو رکھتے ہیں۔

Options :

1. ✓ 256

2. ✘ 356

3. ✘ 456

4. ✘ 556

Question Number : 147 Question Id : 381906752 Question Type : MCQ Option Shuffling : No
Display Question Number : Yes Is Question Mandatory : No Calculator : None Response Time
: N.A Think Time : N.A Minimum Instruction Time : 0

Correct Marks : 1 Wrong Marks : 0

Characters that are not used in calculations are usually stored in a
_____ .

وہ کیرکٹرز جو محسوبات میں استعمال نہیں ہوتے، انہیں عام طور پر۔۔۔۔ میں اسٹور کیا جاتا ہے

Options :

text field

1. ✓ ٹیکسٹ فیلڈ

date field

2. ✗ ڈیٹ فیلڈ

binary field

3. ✗ بائنری فیلڈ

database

4. ✗ ڈیٹا بیس

Question Number : 148 Question Id : 381906753 Question Type : MCQ Option Shuffling : No
Display Question Number : Yes Is Question Mandatory : No Calculator : None Response Time
: N.A Think Time : N.A Minimum Instruction Time : 0

Correct Marks : 1 Wrong Marks : 0

The fields which typically include automatic error checking features are _____ .

وہ فیلڈز جس میں عام طور پر آٹو میٹک غلطیاں چیک کرنے کی خصوصیات شامل ہوتی ہیں وہ۔۔۔۔۔ ہیں

Options :

binary

1. ✗ بائنری

text

2. ✗ ٹیکسٹ

numeric

3. ✗ نیومرک

date and time

4. ✓ تاریخ اور وقت

Question Number : 149 Question Id : 381906754 Question Type : MCQ Option Shuffling : No
Display Question Number : Yes Is Question Mandatory : No Calculator : None Response Time
: N.A Think Time : N.A Minimum Instruction Time : 0

Correct Marks : 1 Wrong Marks : 0

The order in which program statements are executed is called _____ .

وہ ترتیب جس میں پروگرام بیانات عمل کئے جاتے ہیں۔۔۔۔ کہلاتے ہیں

Options :

program syntax

1. ✘ پروگرام سنٹکس

programming language

2. ✘ پروگرامنگ لنگویج

program execution

3. ✘ پروگرام ایگزیکوشن

program control flow

4. ✓ پروگرام کنٹرول فلو

Question Number : 150 Question Id : 381906755 Question Type : MCQ Option Shuffling : No
Display Question Number : Yes Is Question Mandatory : No Calculator : None Response Time
: N.A Think Time : N.A Minimum Instruction Time : 0

Correct Marks : 1 Wrong Marks : 0

Anti-spyware utilities can detect the spyware and _____ programs.

انٹینی اسپائی ویئر کی سہولتیں اسپائی ویئر اور ---- پروگراموں کی چھان بین کرتی ہے

Options :

viruses

1. ✘ وائرس

net bug

2. ✘ نیٹ بگ

program bug

3. ✘ پروگرام بگ

web bug

4. ✔ ویب بگ